

Topic: Data Handling

Date _____

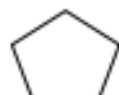
WORK SHEET No. 1

Month _____

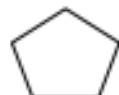
Competency: - Understanding basic concepts: -

1. Given below are objects that you see in your home. Count the number of letters in each object.

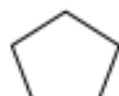
T A B L E



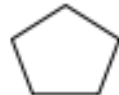
C H A I R



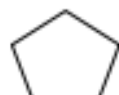
F A N



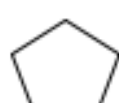
W I N D O W



C O M P U T E R



L I G H T



How many objects have 5 letters

How many objects have 3 letters

How many objects have 7 letters

How many times letter A comes in all the objects taken together

How many times letter M comes in all the objects taken together

Teacher's sign


Parent's sign

WORK SHEET NO. 2


Date _____

Month _____

Competency: - Understanding basic concepts: -



1. Count the following shapes in the above picture .



Teacher's sign

Parent's sign

**WORK SHEET NO. 3**

Date _____

Month _____

Competency : Formation of Numbers

These are the names of some flowers grown in our school garden. Count the members of alphabets in each flower.

1. R O S E

4

2. J A S M I N E

3. H I S B I S C U S

4. P E R I W I N K L E

5. G U L M O H A R

6. D A H L I A

7. B A L S A M

1. How many flowers have 6 alphabets in their name _____

2. How many flowers have 8 alphabets in their name? _____

3. Which flower has the least number of alphabets? _____

4. How many " i " are there in all the names? _____

Teacher's sign.

Parents' sign.

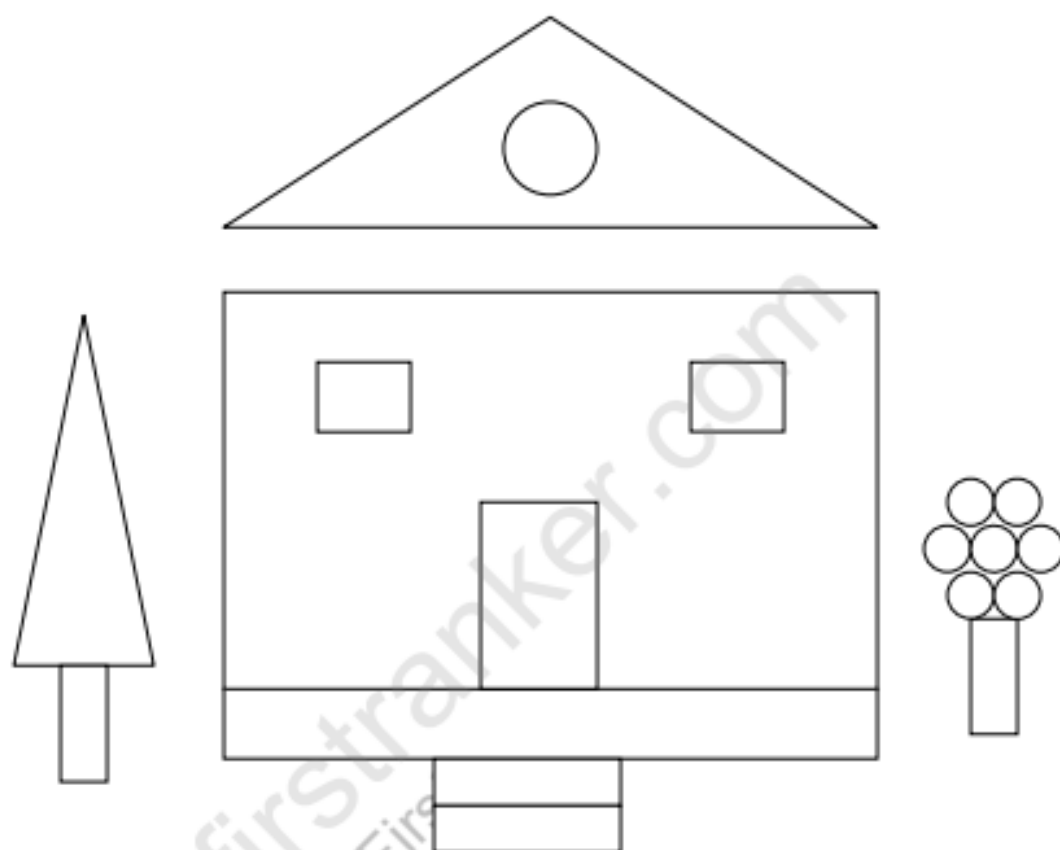


WORK SHEET NO. 4

Date _____

Month _____

Competency:- Problem Solving Ability



Count the shapes in the above picture

Name the shape that occurs most _____



Name the shape that occurs least _____



Teacher's sign

Parent's sign