



Question Paper Name: REGIONAL DEVELOPMENT GEOGRAPHY 30th May 2019 Shift 1 Set1
Subject Name: REGIONAL DEVELOPMENT: GEOGRAPHY
Creation Date: 2019-05-30 13:50:41
Duration: 180
Total Marks: 100
Display Marks: Yes
Share Answer Key With Delivery Engine: Yes
Actual Answer Key: Yes

REGIONAL DEVELOPMENT: GEOGRAPHY

Group Number : 1
Group Id : 128206186
Group Maximum Duration : 0
Group Minimum Duration : 120
Revisit allowed for view? : No
Revisit allowed for edit? : No
Break time: 0
Group Marks: 100

Section A

Section Id : 128206511
Section Number : 1
Section type : online
Mandatory or Optional: Mandatory
Number of Questions: 9
Number of Questions to be attempted: 9
Section Marks: 52
Display Number Panel: Yes
Group All Questions: No

Sub-Section Number: 1
Sub-Section Id: 128206500
Question Shuffling Allowed : Yes

Question Number : 1 **Question Id : 12820610896** **Question Type : MCQ** **Option Shuffling : No** **Display Question Number : Yes**
Single Line Question Option : No **Option Orientation : Vertical**
Correct Marks : 4 **Wrong Marks : 0**

values that divide the number of observations into four equal parts are known as quartiles. Which one of the following formula best defines Q_3 , where n is the total number of frequencies; c is the cumulative frequency; f is class frequency of the median class and h is the class interval of the median class.

- a. $Q_3 = 1 + \{(n/4) - c\}/f \times h$
- b. $Q_3 = Q_2$
- c. $Q_3 = 1 + [(3n/4) - c]/f \times h$
- d. $Q_3 = 1 - \sum fx/n$

Options :

12820643059. A

12820643060. B

12820643061. C

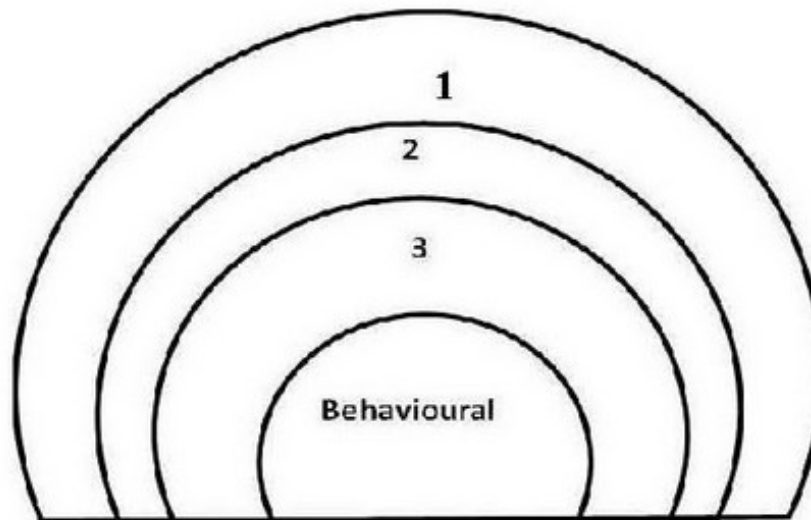
12820643062. D

Question Number : 2 Question Id : 12820610897 Question Type : MCQ Option Shuffling : No Display Question Number : Yes
Single Line Question Option : No Option Orientation : Vertical

Correct Marks : 4 Wrong Marks : 0

www.FirstRanker.com

The diagram below has been reproduced from J Sonnenfeld (1972), which presents a classification of environment into 4 categories. At the broadest level is the geographical environment, constituting both proximal and distal elements of human universe. The environment that elicits a response from human is defined as the behavioural environment. Operating environment is a stage which impinges on human more directly, while perceptual environment is the one human is aware of. In the stages from geographical to behavioural where would you place geographical, operational and perceptual environment respectively in the diagram?



- a. Geographical= 1, Perceptual=2 & Operational=3
- b. Perceptual= 1, Geographical=2 & Operational=3
- c. Operational = 1, Perceptual=2 & Geographical=3
- d. Perceptual= 1, Operational=2 & Geographical=3

Options :

- 12820643063. A
- 12820643064. B
- 12820643065. C
- 12820643066. D

Sub-Section Number: 2
Sub-Section Id: 128206501
Question Shuffling Allowed : Yes

Question Id : 12820610898 Question Type : COMPREHENSION Sub Question Shuffling Allowed : Yes Group Comprehension Questions : No

Question Numbers : (3 to 7)

Question Label : Comprehension

Study on poverty in Greater Mumbai randomly selected 5 notified slums occupied by different caste groups and migrants from different regions to understand the types of government water and sanitation facilities that are available to the slum dwellers. 5 key persons' interviews were held per slum to understand the history of the slum, the general characteristics of the inhabitants and the types of water and sanitation facilities generally used by the inhabitants. The researcher conducted 10 focus group discussions to understand the gender perspective with respect to the availability of these two facilities. Other than this, in-depth interviews were conducted with 10 men and 10 women from households that received benefits from government programmes.

Sub questions

Question Number : 3 Question Id : 12820610899 Question Type : MCQ Option Shuffling : No Display Question Number : Yes
Single Line Question Option : No Option Orientation : Vertical
Correct Marks : 4 Wrong Marks : 0

Which group of methods were used for study?

- Quantitative only.
- Qualitative only.
- Mixed method.
- Primarily qualitative with supplementary quantitative methods.

Options :

12820643067. A
12820643068. B
12820643069. C
12820643070. D

Question Number : 4 Question Id : 12820610900 Question Type : MCQ Option Shuffling : No Display Question Number : Yes
Single Line Question Option : No Option Orientation : Vertical
Correct Marks : 4 Wrong Marks : 0

What is the most likely reason for selecting slums for the study of poverty in Mumbai?

- Most of Mumbai's poor reside in slums.
- Mumbai has largest share of population living in slums compared to other cities.
- It is easy to locate poor households in slums.
- All of the above.

Options :

12820643071. A
12820643072. B
12820643073. C
12820643074. D

Question Number : 5 Question Id : 12820610901 Question Type : MCQ Option Shuffling : No Display Question Number : Yes
Single Line Question Option : No Option Orientation : Vertical
Correct Marks : 4 Wrong Marks : 0

you think notified slums were selected for the study?

- a. More of the households are likely to be benefited through government programmes in the notified slums, and understanding the same is one of the objectives of the study.
- b. It is easier to find gender differentials more easily in notified slums.
- c. There are many more notified slums in Mumbai than non-notified ones.
- d. None of the above.

Options :

- 12820643075. A
- 12820643076. B
- 12820643077. C
- 12820643078. D

Question Number : 6 Question Id : 12820610902 Question Type : MCQ Option Shuffling : No Display Question Number : Yes
Single Line Question Option : No Option Orientation : Vertical

Correct Marks : 4 Wrong Marks : 0

Three types of research methods were used in the study because

- a. It is possible to validate the result of one method with another.
- b. Each facilitated data collection of different aspects of the study.
- c. Three methods are always better than one method.
- d. With the kind of objective that the study seems to have, these three methods were absolutely essential.

Options :

- 12820643079. A
- 12820643080. B
- 12820643081. C
- 12820643082. D

Question Number : 7 Question Id : 12820610903 Question Type : MCQ Option Shuffling : No Display Question Number : Yes
Single Line Question Option : No Option Orientation : Vertical

Correct Marks : 4 Wrong Marks : 0

The nature of data collection in this study seems to be most amenable to conclusions about

- a. Gender perspective of water and sanitation facilities
- b. Caste differences of access to the two facilities
- c. Differential access of the two facilities by migrants from different regions.
- d. All of the above.

Options :

- 12820643083. A
- 12820643084. B
- 12820643085. C
- 12820643086. D

Question Number : 8 Question Id : 12820610904 Question Type : MCQ Option Shuffling : No Display Question Number : Yes
Single Line Question Option : No Option Orientation : Vertical

Correct Marks : 4 Wrong Marks : 0

Which one of the following does not apply to postmodernism?

- a. It's a style that originated in literature emphasizing the general trend in favour of difference and lack of conformity to over-riding structural imperatives.
- b. It's an epoch that portrays current developments within society as a major break with the past.
- c. It's a method that avoids the notions of universal truths and meta theories.
- d. Believes in order

Options :

12820643087. A

12820643088. B

12820643089. C

12820643090. D

Question Number : 9 Question Id : 12820610905 Question Type : MCQ Option Shuffling : No Display Question Number : Yes
Single Line Question Option : No Option Orientation : Vertical

Correct Marks : 4 Wrong Marks : 0

According to Peter Haggett spatial systems evolve in a certain sequence. Which one among the following is true?

- A. Hierarchies → diffusion → movements
- B. Movements → channels → nodes
- C. Movements → channels → nodes → diffusion
- D. Movements → diffusion → channels

- a. B, & C are true
- b. A, C & D are true
- c. only C is false
- d. All are false.

Options :

12820643091. A

12820643092. B

12820643093. C

12820643094. D

Question Number : 10 Question Id : 12820610906 Question Type : MCQ Option Shuffling : No Display Question Number : Yes
Single Line Question Option : No Option Orientation : Vertical

Correct Marks : 4 Wrong Marks : 0

- A. There are three main controls on landscape development: structure, process and stage.
 - B. There are three main controls on landscape development: youth, maturity and old.
 - C. The process is initiated by rapid uplift of a block of land.
 - D. Low level surfaces are called polycyclic landscapes.
- a. A & C are false while B & D are true.
 - b. A, B & C are false while D is true.
 - c. A, B & D are false while C is true.
 - d. B & C are false while A & C are true.

Options :

12820643095. A

12820643096. B

12820643097. C

12820643098. D

Question Number : 11 Question Id : 12820610907 Question Type : MCQ Option Shuffling : No Display Question Number : Yes
Single Line Question Option : No Option Orientation : Vertical

Correct Marks : 4 Wrong Marks : 0

Which among the following is correct in the context of glacial depositional features?

- A. Till is an unstratified deposit composed of a seemingly chaotic assemblage of stones of various sizes set in a finer mass of clay.
 - B. When a stagnant glacier downmelts on the spot, englacial and supraglacial material will accumulate in heaps called ablation till.
 - C. Moraines are usually composed of both till and fluvioglacial material.
 - D. Till is also known as Drumlins.
- a. A, B & C are true.
 - b. A, B & C are false.
 - c. A, B & D are true.
 - d. A, C & D are true.

Options :

12820643099. A

12820643100. B

12820643101. C

12820643102. D

Question Number : 12 Question Id : 12820610908 Question Type : MCQ Option Shuffling : No Display Question Number : Yes
Single Line Question Option : No Option Orientation : Vertical

Correct Marks : 4 Wrong Marks : 0

- Chi-square is used for associations between qualitative variables.
 - It can also be used when either of the two variables is quantitative.
 - It's a method to test the correspondence between observed and estimated frequencies.
- A, B & C are true.
 - A, B & C are false.
 - A & B are true but C is false.
 - A & C are true but B is false.

Options :

12820643103. A
12820643104. B
12820643105. C
12820643106. D

Question Number : 13 Question Id : 12820610909 Question Type : MCQ Option Shuffling : No Display Question Number : Yes
Single Line Question Option : No Option Orientation : Vertical

Correct Marks : 4 Wrong Marks : 0

Schaefer's Exceptionalism in Geography presents a strong methodological and theoretical critique and challenge of the discipline. Which of the following statements are associated with his criticism?

- Schaefer challenged Hartahorne's interpretation of the works of Hettner.
 - He criticized exceptionalist claims for regional geography.
 - He argued that the claim for geography as the integrating science was arrogant.
 - Geographical procedures differ from other sciences as it deals with unique regions and places.
- A, B & C are true but D is false.
 - A, B & D are true but C is false.
 - A, C & D are true but B is false.
 - A, B, C & D are all true.

Options :

12820643107. A
12820643108. B
12820643109. C
12820643110. D

Section B

Section Id :

128206312

Section Number :

2

Section type :

www.FirstRanker.com

Mandatory or Optional:

Mandatory

Section Marks:

Display Number Panel:

Group All Questions:

www.FirstRanker.com

www.FirstRanker.com

Sub-Section Number:

Sub-Section Id:

Question Shuffling Allowed :

13

13

38

Yes

No

1

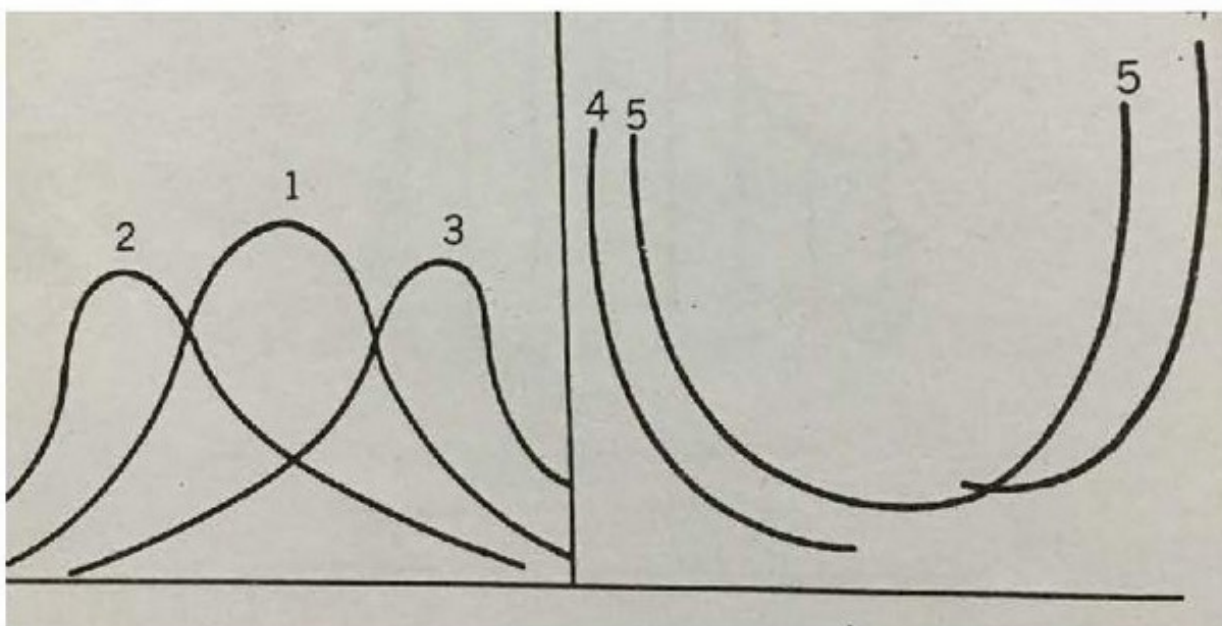
128206503

Yes

Question Number : 14 Question Id : 12820610910 Question Type : MCQ Option Shuffling : No Display Question Number : Yes
Single Line Question Option : No Option Orientation : Vertical

Correct Marks : 2 Wrong Marks : 0

The figure below shows frequency polygon of a certain distribution. Identify which one of the following in the diagram is extremely asymmetrical?



- a. 1
- b. 2 & 5
- c. 3 & 5
- d. 4

Options :

12820643111. A

12820643112. B

12820643113. C

12820643114. D

Sub-Section Number:

Sub-Section Id:

Question Shuffling Allowed :

2

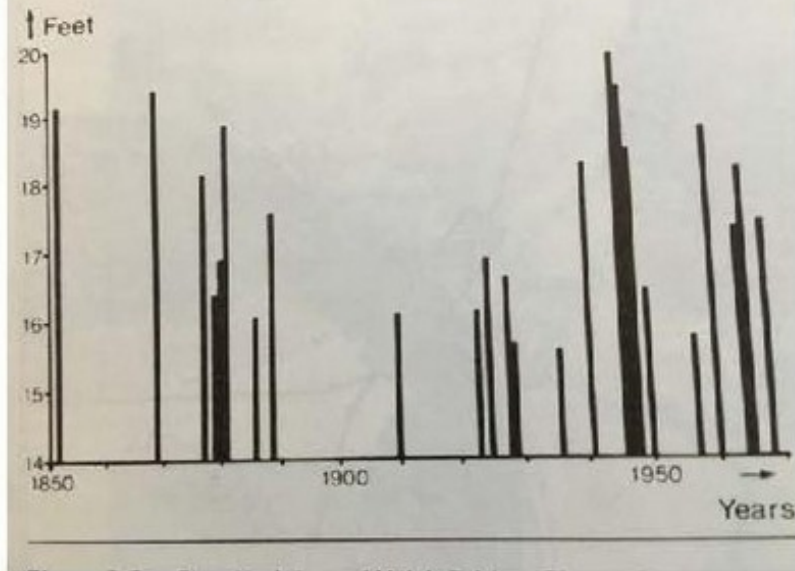
128206504

Yes

Question Id : 12820610911 Question Type : COMPREHENSION Sub Question Shuffling Allowed : Yes Group Comprehension
Questions : No

www.FirstRanker.com

Question Numbers : (15 to 18)



Sub questions

Question Number : 15 Question Id : 12820610912 Question Type : MCQ Option Shuffling : No Display Question Number : Yes
Single Line Question Option : No Option Orientation : Vertical

Correct Marks : 2 Wrong Marks : 0

Which are the two periods when the flood levels have been a little more frequent and high?

- a. 1869 & 1960
- b. Mid-nineteenth century and 1940s
- c. 1890s and 1960s
- d. None of the above

Options :

- 12820643115. A
- 12820643116. B
- 12820643117. C
- 12820643118. D

Question Number : 16 Question Id : 12820610913 Question Type : MCQ Option Shuffling : No Display Question Number : Yes
Single Line Question Option : No Option Orientation : Vertical

Correct Marks : 2 Wrong Marks : 0

Which are the longest two periods when no floods were recorded?

- a. Early 1850s to 1869 and 1889 to 1910
- b. Early 1850s to 1910
- c. Early 1850s to 1869 and 1910 to 1923
- d. All the above

Options :

- 12820643119. A
- 12820643120. B
- 12820643121. C

Question Number : 17 Question Id : 12820610914 Question Type : MCQ Option Shuffling : No Display Question Number : Yes
Single Line Question Option : No Option Orientation : Vertical

Correct Marks : 2 Wrong Marks : 0

Which of the following statements can't be deciphered from the reference diagram?

- a. Between the 1860 and 1900, the only flood to exceed 19 feet level was in 1869.
- b. The period since 1940 has seen a series of major floods.
- c. There were three consecutive years of flooding when the level remained above 18ft.
- d. The flood of 1946 has a recurrence interval of at least of 120 years and that of 1960 of around 20 years.

Options :

12820643123. A

12820643124. B

12820643125. C

12820643126. D

Question Number : 18 Question Id : 12820610915 Question Type : MCQ Option Shuffling : No Display Question Number : Yes
Single Line Question Option : No Option Orientation : Vertical

Correct Marks : 2 Wrong Marks : 0

Which of the following statements are not true as you read the diagram above?

- a. The frequency of flood years has increased in the 1940 and later.
- b. The latter half of 19th Century recorded less flood years compared to the rest of the period shown in the diagram.
- c. The pattern of flooding is more-or-less the same during the 170 years.
- d. None of the above.

Options :

12820643127. A

12820643128. B

12820643129. C

12820643130. D

Sub-Section Number:

3

Sub-Section Id:

128206505

Question Shuffling Allowed :

Yes

Question Id : 12820610916 Question Type : COMPREHENSION Sub Question Shuffling Allowed : Yes Group Comprehension Questions : No

Question Numbers : (19 to 22)

Question Label : Comprehension

...ious transformation of North West England and Central Scotland has been associated with, and substantially helped by the new motorways, the freight terminals, port developments, new airport facilities, modern schools and hospitals, housing developments and the derelict land clearance schemes...all assisted in broadening the economic potential of the Assisted Areas, and have accelerated their ability to respond to a rapidly changing national and international environment. Paralleling these changes there has evolved a new set of perceptions by entrepreneurs concerning the country's economic space. Distance (especially from London) and location both have very different meanings in 1975 as compared with 10 or 15 years ago. Swansea no longer seems the remote outpost., as it undoubtedly appeared to many industrialists being encouraged to relocate there at the end of the 1950s; and the opportunities for successful enterprise in North West England are much more widely recognized today... Irrespective of government incentives the Assisted Areas are now well-placed to attract a substantial share of the manufacturing investment in the years ahead... Apart from the special assistance made available to particular industries such as the coal mining that are primarily located in the Assisted areas, regional development expenditure is now running at a rate of nearly £600 million each year. Taking into account the so called 'Exchequer Clawback' – new employers and employees in the Assisted Areas pay back to government direct and indirect taxes, and the policy results in fewer benefits being paid to unemployed workers – the net expense of regional policy is undoubtedly very much less...the resource cost of regional policy can be regarded as close to zero or even negative. It may be sound economics. It may be alchemy." (Manners, 1976: *Three Banks Review*, p.111)

Sub questions

Question Number : 19 Question Id : 12820610917 Question Type : MCQ Option Shuffling : No Display Question Number : Yes
Single Line Question Option : No Option Orientation : Vertical
Correct Marks : 2 Wrong Marks : 0

Which one of the following factors was not associated with the changes in the economic space in the North West England?

- a. Government incentives
- b. Improvements in economic infrastructure
- c. Improvements in social infrastructure
- d. Coal mining technology

Options :

- 12820643131. A
- 12820643132. B
- 12820643133. C
- 12820643134. D

Question Number : 20 Question Id : 12820610918 Question Type : MCQ Option Shuffling : No Display Question Number : Yes
Single Line Question Option : No Option Orientation : Vertical
Correct Marks : 2 Wrong Marks : 0

- a. Distance from London.
- b. Location from London.
- c. Distance from Swansea
- d. Distance from major markets and location that is now facilitated by better infrastructure for procurement of raw materials.

Options :

- 12820643135. A
- 12820643136. B
- 12820643137. C
- 12820643138. D

Question Number : 21 Question Id : 12820610919 Question Type : MCQ Option Shuffling : No Display Question Number : Yes
Single Line Question Option : No Option Orientation : Vertical

Correct Marks : 2 Wrong Marks : 0

What is meant by “Exchequer Clawback”?

- a. Burden of special assistance on the government exchequer.
- b. Net expense of regional policy is negative.
- c. Due to opportunities for locating successful enterprises and employment opportunities, the employers and employees are paying more taxes.
- d. Net expense of regional policy is higher.

Options :

- 12820643139. A
- 12820643140. B
- 12820643141. C
- 12820643142. D

Question Number : 22 Question Id : 12820610920 Question Type : MCQ Option Shuffling : No Display Question Number : Yes
Single Line Question Option : No Option Orientation : Vertical

Correct Marks : 2 Wrong Marks : 0

What is meant by alchemy?

- a. A seemingly magical process of transformation
- b. Converting matter into gold.
- c. A seemingly magical process of transformation by expanding infrastructure and creating more opportunities of income and thereby expansion of the tax base.
- d. All of the above.

Options :

12820643143. A
12820643144. B
12820643145. C
12820643146. D

Sub-Section Number: 4
Sub-Section Id: 128206506
Question Shuffling Allowed : Yes

Question Number : 23 Question Id : 12820610921 Question Type : MCQ Option Shuffling : No Display Question Number : Yes
Single Line Question Option : No Option Orientation : Vertical

Correct Marks : 2 Wrong Marks : 0

Which one of the following is not valid for the behavioural matrix proposed by Alan Pred in 1967?

- a. Matrix is a combination of quantity and quality of information.
- b. Matrix also takes into consideration the ability to use that information.
- c. Completely informed rational decision-makers are located in the bottom right-hand corner of the matrix.
- d. There is a complete synergy between the information and the decision maker.

Options :

12820643147. A
12820643148. B
12820643149. C
12820643150. D

Question Number : 24 Question Id : 12820610922 Question Type : MCQ Option Shuffling : No Display Question Number : Yes
Single Line Question Option : No Option Orientation : Vertical

Correct Marks : 2 Wrong Marks : 0

Who among the following suggested that the decision-makers were not always looking out for an optimizing solution, rather satisficing solutions:

- a. Dudley Stamp
- b. Allen Pred
- c. Julian Wolpert
- d. Gilbert White

Options :

12820643151. A
12820643152. B
12820643153. C

Question Number : 25 Question Id : 12820610923 Question Type : MCQ Option Shuffling : No Display Question Number : Yes
Single Line Question Option : No Option Orientation : Vertical

Correct Marks : 2 Wrong Marks : 0

As per the world systems theory, the core-periphery relationship would be as follows

- a. The economic disparity between the core and the peripheral countries is likely to widen in future.
- b. The economic disparity between the core and the peripheral countries is likely to bridge in future.
- c. The economic disparity between the core and the peripheral countries is likely to remain constant.
- d. No steady economic relationship between the core and the peripheral countries can be predicted.

Options :

- 12820643155. A
- 12820643156. B
- 12820643157. C
- 12820643158. D

Question Number : 26 Question Id : 12820610924 Question Type : MCQ Option Shuffling : No Display Question Number : Yes
Single Line Question Option : No Option Orientation : Vertical

Correct Marks : 2 Wrong Marks : 0

The concept that the distribution of one phenomenon is scientifically related to the location of another is

- a. Regional Analysis
- b. Spatial Analysis
- c. Spatial Association
- d. Spatial Distribution

Options :

- 12820643159. A
- 12820643160. B
- 12820643161. C
- 12820643162. D

Question Number : 27 Question Id : 12820610925 Question Type : MCQ Option Shuffling : No Display Question Number : Yes
Single Line Question Option : No Option Orientation : Vertical

Correct Marks : 2 Wrong Marks : 0

As per Weber's industrial theory, isodapanes are lines of

- a. Equal transport cost
- b. Equal cost
- c. Equal additional cost
- d. Equal additional transport cost

Options :

- 12820643163. A
- 12820643164. B

Question Number : 28 Question Id : 12820610926 Question Type : MCQ Option Shuffling : No Display Question Number : Yes
Single Line Question Option : No Option Orientation : Vertical

Correct Marks : 2 Wrong Marks : 0

The following is (are) not a factor(s) of soil formation

- a. Organic matter
- b. Time
- c. Soil texture
- d. All of the above

Options :

12820643167. A

12820643168. B

12820643169. C

12820643170. D

Question Number : 29 Question Id : 12820610927 Question Type : MCQ Option Shuffling : No Display Question Number : Yes
Single Line Question Option : No Option Orientation : Vertical

Correct Marks : 2 Wrong Marks : 0

Which of the following is an example of time-space compression?

- a. A decline of absolute importance of distance
- b. A reduction in time required to travel between two places
- c. An increase in relative importance of distance
- d. None of the above

Options :

12820643171. A

12820643172. B

12820643173. C

12820643174. D

Question Number : 30 Question Id : 12820610934 Question Type : MCQ Option Shuffling : No Display Question Number : Yes
Single Line Question Option : No Option Orientation : Vertical

Correct Marks : 2 Wrong Marks : 0

A change that satisfies Pareto optimality requires which of the following criterion?

- a. A person can be made better off by making others worse off.
- b. A person can be made better off by making others better off.
- c. A person can be made better off without making others worse off.
- d. A person can be made better off without making others better off.

Options :

12820643175. A

12820643176. B

12820643177. C

12820643178. D

Dead cliff is a part of

- An accumulation of beach deposits due to the ceasing of further wave attack.
- A residue of stump
- A slope occurring between the continental shelf and the continental slope
- A ledge or a projecting layer

Options :

12820643179. A
 12820643180. B
 12820643181. C
 12820643182. D

Question Number : 32 Question Id : 12820610930 Question Type : MCQ Option Shuffling : No Display Question Number : Yes
 Single Line Question Option : No Option Orientation : Vertical

Correct Marks : 2 Wrong Marks : 0

Which of the following is not one associated with the word 'scale'?

- Extent
- Fraction
- Detail
- Ratio

Options :

12820643183. A
 12820643184. B
 12820643185. C
 12820643186. D

Section Id :

Section Number :

Section type :

Mandatory or Optional:

Number of Questions:

Number of Questions to be attempted:

Section Marks:

Display Number Panel:

Group All Questions:

Section C

128206313

3

Online

Mandatory

10

10

10

Yes

No

Sub-Section Number:

1

Sub-Section Id:

128206507

Question Shuffling Allowed :

Yes

Question Number : 33 Question Id : 12820610931 Question Type : MCQ Option Shuffling : No Display Question Number : Yes
 Single Line Question Option : No Option Orientation : Vertical

Correct Marks : 1 Wrong Marks : 0

- the correct statement from the following
- a. Remote sensing platforms are always mobile
 - b. In remote sensing, platforms are places of interaction between the radiation and the object
 - c. Other things remaining the same, the spatial resolution of the image become poorer with height of the platform
 - d. None of the above

Options :

- 12820643187. A
- 12820643188. B
- 12820643189. C
- 12820643190. D

Question Number : 34 Question Id : 12820610932 Question Type : MCQ Option Shuffling : No Display Question Number : Yes
Single Line Question Option : No Option Orientation : Vertical

Correct Marks : 1 Wrong Marks : 0

The process in which different crops are grown in alternate rows and are sown at different times to protect the soil from rain wash, is known as

- a. Crop rotation
- b. Intercropping
- c. Terrace farming
- d. Contour cropping

Options :

- 12820643191. A
- 12820643192. B
- 12820643193. C
- 12820643194. D

Question Number : 35 Question Id : 12820610933 Question Type : MCQ Option Shuffling : No Display Question Number : Yes
Single Line Question Option : No Option Orientation : Vertical

Correct Marks : 1 Wrong Marks : 0

Who among the following is associated with diffusion studies in geography?

- a. D. Gregory
- b. D. Harvey
- c. T. Hagerstrand
- d. G. Olsson

Options :

- 12820643195. A
- 12820643196. B
- 12820643197. C
- 12820643198. D

Question Number : 36 Question Id : 12820610934 Question Type : MCQ Option Shuffling : No Display Question Number : Yes
Single Line Question Option : No Option Orientation : Vertical

Correct Marks : 1 Wrong Marks : 0

- a. R. Adams
- b. P.G. Hall
- c. G.Trewartha
- d. E. Howard

Options :

- 12820643199. A
- 12820643200. B
- 12820643201. C
- 12820643202. D

Question Number : 37 Question Id : 12820610935 Question Type : MCQ Option Shuffling : No Display Question Number : Yes
Single Line Question Option : No Option Orientation : Vertical

Correct Marks : 1 Wrong Marks : 0

The association of productive activities in close proximity to one another is known as:

- a. Agglomeration
- b. Central Place
- c. Central Business District
- d. Zoning

Options :

- 12820643203. A
- 12820643204. B
- 12820643205. C
- 12820643206. D

Question Number : 38 Question Id : 12820610936 Question Type : MCQ Option Shuffling : No Display Question Number : Yes
Single Line Question Option : No Option Orientation : Vertical

Correct Marks : 1 Wrong Marks : 0

Intra Urban spatial variations in land values, land use and land intensity is explained by

- a. Gravity model
- b. Industrial location
- c. Alonso Model
- d. Public Transport

Options :

- 12820643207. A
- 12820643208. B
- 12820643209. C
- 12820643210. D

Question Number : 39 Question Id : 12820610937 Question Type : MCQ Option Shuffling : No Display Question Number : Yes
Single Line Question Option : No Option Orientation : Vertical

Correct Marks : 1 Wrong Marks : 0

- a. 22 to 33 percent
- b. 30 to 45 percent
- c. 53 to 63 percent
- d. 10 to 20 percent

Options :

- 12820643211. A
- 12820643212. B
- 12820643213. C
- 12820643214. D

Question Number : 40 Question Id : 12820610938 Question Type : MCQ Option Shuffling : No Display Question Number : Yes
Single Line Question Option : No Option Orientation : Vertical

Correct Marks : 1 Wrong Marks : 0

Which of the following soil horizons is also known as the zone of eluviation?

- a. A horizon
- b. B horizon
- c. C horizon
- d. D horizon

Options :

- 12820643215. A
- 12820643216. B
- 12820643217. C
- 12820643218. D

Question Number : 41 Question Id : 12820610939 Question Type : MCQ Option Shuffling : No Display Question Number : Yes
Single Line Question Option : No Option Orientation : Vertical

Correct Marks : 1 Wrong Marks : 0

The method of central tendency that is unsuitable for a data series with extreme values is

- a. Mean
- b. Median
- c. Mode
- d. Mean and Median

Options :

- 12820643219. A
- 12820643220. B
- 12820643221. C
- 12820643222. D

Question Number : 42 Question Id : 12820610940 Question Type : MCQ Option Shuffling : No Display Question Number : Yes
Single Line Question Option : No Option Orientation : Vertical

Correct Marks : 1 Wrong Marks : 0

Economic determinism is the doctrine that believe that the material basis of society is the major factor in determining the social institutions. Who of the following was a major proponent of the same?

- a. W.W. Rostow
- b. F. Engels
- c. R.F. Harrod
- d. D. Ricardo

Options :

12820643223. A

12820643224. B

12820643225. C

12820643226. D

www.FirstRanker.com