



Question Paper Name: Chemical Science 899 30th May 2019 Shift 1 Set1
Subject Name: Chemical Science 899
Creation Date: 2019-05-30 13:50:42
Duration: 180
Total Marks: 100
Display Marks: Yes
Share Answer Key With Delivery Engine: Yes
Actual Answer Key: Yes

Chemical Science 899

Group Number : 1
Group Id : 128206190
Group Maximum Duration : 0
Group Minimum Duration : 120
Revisit allowed for view? : No
Revisit allowed for edit? : No
Break time: 0
Group Marks: 100

PART A

Section Id : 128206119
Section Number : 1
Section type : online
Mandatory or Optional: Mandatory
Number of Questions: 25
Number of Questions to be attempted: 25
Section Marks: 50
Display Number Panel: Yes
Group All Questions: No

Sub-Section Number: 1
Sub-Section Id: 128206515
Question Shuffling Allowed : Yes

Question Number : 1 **Question Id : 12820611197** **Question Type : MCQ** **Option Shuffling : No** **Display Question Number : Yes**
Single Line Question Option : No **Option Orientation : Vertical**
Correct Marks : 2 **Wrong Marks : 0**

form of trichloroacetaldehyde in the hydrated form (Chloral hydrate) and in the dried form, respectively, would show: www.FirstRanker.com www.FirstRanker.com

- (a) A broad peak at 3400 cm^{-1} and a strong peak at 1770 cm^{-1}
- (b) A sharp peak at 3400 cm^{-1} and a weak peak at 1770 cm^{-1}
- (c) A broad peak at 3400 cm^{-1} and a weak peak at 1770 cm^{-1}
- (d) A sharp peak at 3400 cm^{-1} and a strong peak at 1770 cm^{-1}

Options :

- 12820644247. A
- 12820644248. B
- 12820644249. C
- 12820644250. D

Question Number : 2 Question Id : 12820611198 Question Type : MCQ Option Shuffling : No Display Question Number : Yes
Single Line Question Option : No Option Orientation : Vertical
Correct Marks : 2 Wrong Marks : 0

For the exact mass determination of the bee alarm pheromone with a composition of $\text{C}_6\text{H}_{10}\text{O}_2$, the calculated and the observed mass are 114.068075 and 114.1039, respectively. The error in ppm is:

- (a) 358
- (b) 103
- (c) 0.04
- (d) 68

Options :

- 12820644251. A
- 12820644252. B
- 12820644253. C
- 12820644254. D

Question Number : 3 Question Id : 12820611199 Question Type : MCQ Option Shuffling : No Display Question Number : Yes
Single Line Question Option : No Option Orientation : Vertical
Correct Marks : 2 Wrong Marks : 0

There are four solvent bottles of MeCN, DMSO, DMF and DCM. Which solvent is the most polar?

- (a) DMF
- (b) DMSO
- (c) MeCN
- (d) DCM

Options :

- 12820644255. A
- 12820644256. B
- 12820644257. C

Question Number : 4 Question Id : 12820611200 Question Type : MCQ Option Shuffling : No Display Question Number : Yes
Single Line Question Option : No Option Orientation : Vertical

Correct Marks : 2 Wrong Marks : 0

The dipole moments of CH_3Cl (1), CH_2Cl_2 (2), CHCl_3 (3) and CCl_4 (4) are in the order of:

- (a) $1 > 3 > 2 > 4$
- (b) $3 > 1 > 2 > 4$
- (c) $2 > 3 > 1 > 4$
- (d) $1 > 2 > 3 > 4$

Options :

12820644259. A

12820644260. B

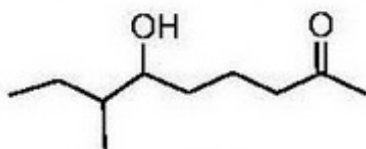
12820644261. C

12820644262. D

Question Number : 5 Question Id : 12820611201 Question Type : MCQ Option Shuffling : No Display Question Number : Yes
Single Line Question Option : No Option Orientation : Vertical

Correct Marks : 2 Wrong Marks : 0

The IUPAC name of the compound given below is:



- (a) 3-methyl-8-keto-nonan-4-ol
- (b) 6-hydroxy-7-methylnonan-2-one
- (c) 6-hydroxy-7-methyl-octan-2-one
- (d) 2-ethyl-3-hydroxylacton-7-one

Options :

12820644263. A

12820644264. B

12820644265. C

12820644266. D

Question Number : 6 Question Id : 12820611202 Question Type : MCQ Option Shuffling : No Display Question Number : Yes
Single Line Question Option : No Option Orientation : Vertical

Correct Marks : 2 Wrong Marks : 0

The % composition of Mg_3PO_4 is:

- (a) 27.7% Mg; 23.6% P; 48.7% O
- (b) 23.6% Mg; 27.7% P; 48.7% O
- (c) 48.7% Mg; 27.7% P; 23.6% O
- (d) ~~48.7% Mg; 23.6% P; 27.7% O~~

Options :

Question Number : 7 Question Id : 12820611203 Question Type : MCQ Option Shuffling : No Display Question Number : Yes
Single Line Question Option : No Option Orientation : Vertical

Correct Marks : 2 Wrong Marks : 0

The language of DNA written in basis (A.T.G.C) is translated into that of a protein by the use of components, which of the following is not one of them?

- (a) Ribosome
- (b) Endosome
- (c) t-RNA
- (d) RNA Polymerase

Options :

- 12820644271. A
- 12820644272. B
- 12820644273. C
- 12820644274. D

Question Number : 8 Question Id : 12820611204 Question Type : MCQ Option Shuffling : No Display Question Number : Yes
Single Line Question Option : No Option Orientation : Vertical

Correct Marks : 2 Wrong Marks : 0

One mole of an ideal monoatomic gas is initially at a pressure P_1 and volume V_1 . It undergoes an adiabatic expansion (i.e., without any transfer of heat) to a volume V_2 and pressure P_2 . During this process, the specific heat of gas is:

- (a) $5R/2$
- (b) $2R$
- (c) $3R/2$
- (d) 0

Options :

- 12820644275. A
- 12820644276. B
- 12820644277. C
- 12820644278. D

Question Number : 9 Question Id : 12820611205 Question Type : MCQ Option Shuffling : No Display Question Number : Yes
Single Line Question Option : No Option Orientation : Vertical

Correct Marks : 2 Wrong Marks : 0

A universal power supply (UPS) has the power delivering capacity of 1.7 kVA with the power factor of 0.8 then which following statement is correct.

- (a) An instrument with running power requirement of 1 kWatt can be connected safely to the UPS.
- (b) An instrument with running power requirement of 1.7 kWatt can be connected safely to the UPS.
- (c) An instrument with running power requirement of any value lower than 2.5 kWatt can be connected safely to the UPS.
- (d) The UPS cannot supply power to any instrument with running power requirement higher than 1 kWatt.

Options :

12820644279. A

12820644280. B

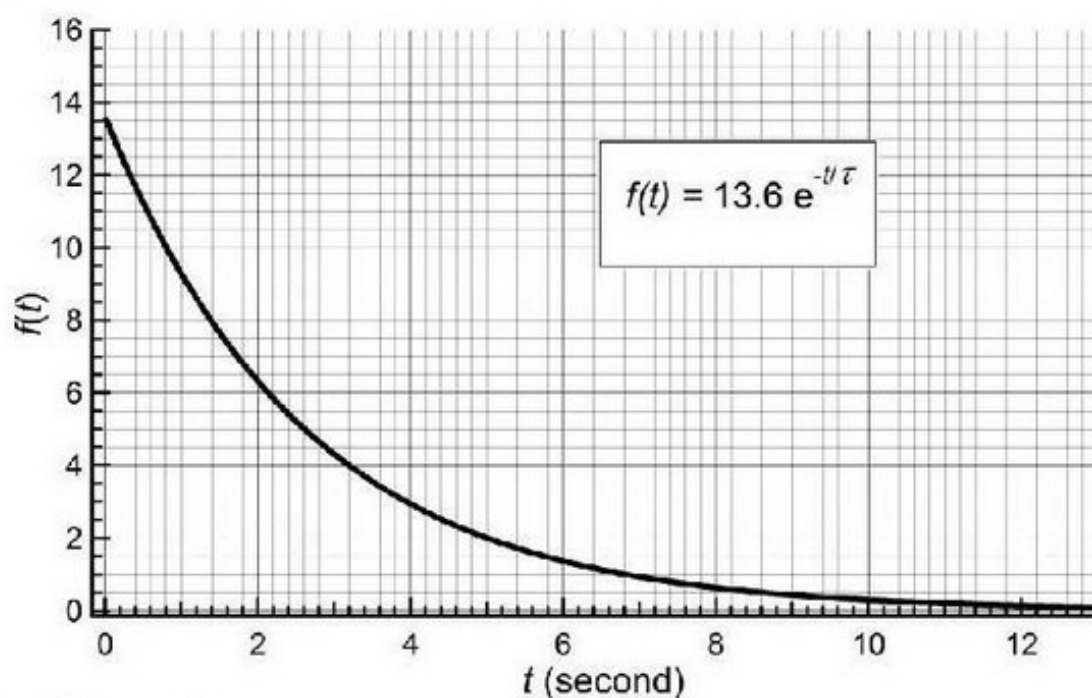
12820644281. C

12820644282. D

Question Number : 10 Question Id : 12820611206 Question Type : MCQ Option Shuffling : No Display Question Number : Yes
Single Line Question Option : No Option Orientation : Vertical

Correct Marks : 2 Wrong Marks : 0

A system response function, $f(t)$ decays with time (t) as shown in figure below. If the value of mathematical constant (e) is given by 2.72 then the time-constant (τ) of decay can be found as:



- (a) 1.6 second.
- (b) 2.6 second.
- (c) 4.6 second.
- (d) 13.6 second.

Options :

12820644283. A

12820644284. B

Question Number : 11 Question Id : 12820611207 Question Type : MCQ Option Shuffling : No Display Question Number : Yes
Single Line Question Option : No Option Orientation : Vertical

Correct Marks : 2 Wrong Marks : 0

In a fluorescence spectrometer, a cuvette containing water is excited by light at 400 nm. The Stokes Raman band due to water O–H stretching frequency of 3400 cm^{-1} will appear at:

- (a) 405 nm.
- (b) 463 nm.
- (c) 800 nm.
- (d) 561 nm.

Options :

- 12820644287. A
- 12820644288. B
- 12820644289. C
- 12820644290. D

Question Number : 12 Question Id : 12820611208 Question Type : MCQ Option Shuffling : No Display Question Number : Yes
Single Line Question Option : No Option Orientation : Vertical

Correct Marks : 2 Wrong Marks : 0

A substance A_xB_y crystallizes in a face centered cubic (FCC) lattice. 'A' atoms occupy each corner of the cube and 'B' atoms occupy the centers of each face of the cube. What will be the correct composition of the substance A_xB_y ?

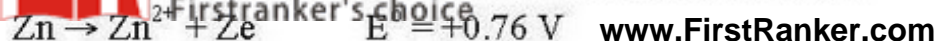
- (a) AB_3
- (b) A_4B_3
- (c) A_3B
- (d) A_8B_6

Options :

- 12820644291. A
- 12820644292. B
- 12820644293. C
- 12820644294. D

Question Number : 13 Question Id : 12820611209 Question Type : MCQ Option Shuffling : No Display Question Number : Yes
Single Line Question Option : No Option Orientation : Vertical

Correct Marks : 2 Wrong Marks : 0



The EMF of the cell reaction $\text{Fe}^{2+} + \text{Zn} \rightarrow \text{Zn}^{2+} + \text{Fe}$ is:

- (a) -0.35V.
- (b) +0.35V.
- (c) +1.17V.
- (d) -1.17V.

Options :

12820644295. A

12820644296. B

12820644297. C

12820644298. D

Question Number : 14 Question Id : 12820611210 Question Type : MCQ Option Shuffling : No Display Question Number : Yes
Single Line Question Option : No Option Orientation : Vertical

Correct Marks : 2 Wrong Marks : 0

With increase in temperature, physical adsorption:

- (a) Decreases.
- (b) Increases.
- (c) Increases and decreases.
- (d) No effect.

Options :

12820644299. A

12820644300. B

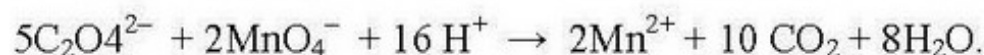
12820644301. C

12820644302. D

Question Number : 15 Question Id : 1282061211 Question Type : MCQ Option Shuffling : No Display Question Number : Yes
Single Line Question Option : No Option Orientation : Vertical

Correct Marks : 2 Wrong Marks : 0

A sample containing sodium oxalate (molecular weight = 134) is titrated with 40.0 mL of 0.02(M) potassium permanganate in an acid solution. The concerned ionic equation is:



The amount of sodium oxalate present in the sample is:

- (a) 0.27 g
- (b) 0.54 g
- (c) 1.10 g
- (d) 0.87 g

12820644303. A
12820644304. B
12820644305. C
12820644306. D

Question Number : 16 Question Id : 12820611212 Question Type : MCQ Option Shuffling : No Display Question Number : Yes
Single Line Question Option : No Option Orientation : Vertical

Correct Marks : 2 Wrong Marks : 0

The inter-nuclear distance in HI is 1.62\AA . If the measured dipole moment is 0.38 D , calculate the % ionic character of HI. Given, electronic charge $(e) = 4.8 \times 10^{-10}\text{ esu}$.

One Debye (1D) = $1.0 \times 10^{-18}\text{ esu-cm} = 3.36 \times 10^{-30}\text{ C-m}$:

- (a) 77.76
- (b) 4.89
- (c) 20.46
- (d) 7.78

Options :

12820644307. A
12820644308. B
12820644309. C
12820644310. D

Question Number : 17 Question Id : 12820611213 Question Type : MCQ Option Shuffling : No Display Question Number : Yes
Single Line Question Option : No Option Orientation : Vertical

Correct Marks : 2 Wrong Marks : 0

The color of the coordination compounds depends on the crystal field splitting. What will be the decreasing order of absorption wavelength in the visible region for the following complexes?

- I. $[\text{Co}(\text{NH}_3)_6]^{3+}$
- II. $[\text{Co}(\text{H}_2\text{O})_6]^{3+}$
- III. $[\text{Co}(\text{CN})_6]^{3-}$

- (a) $\text{I} > \text{II} > \text{III}$
- (b) $\text{III} > \text{I} > \text{II}$
- (c) $\text{II} > \text{III} > \text{I}$
- (d) $\text{II} > \text{I} > \text{III}$

Options :

12820644311. A
12820644312. B
12820644313. C
12820644314. D

In the complex, $[\text{Ni}_2(\eta^5\text{-Cp})_2(\text{CO})_2]$, the IR stretching frequency appears at 1857 cm^{-1} (strong) and 1897 cm^{-1} (weak). The valence electron count and the nature of the M-CO bond respectively are:

- (a) $16e^-$, bridging.
- (b) $17e^-$, bridging.
- (c) $18e^-$, terminal.
- (d) $18e^-$, bridging.

Options :

- 12820644315. A
- 12820644316. B
- 12820644317. C
- 12820644318. D

Question Number : 19 Question Id : 12820611215 Question Type : MCQ Option Shuffling : No Display Question Number : Yes

Single Line Question Option : No Option Orientation : Vertical

Correct Marks : 2 Wrong Marks : 0

Which of the following mixture represents Zimmermann-Reinhardt's reagent?

- (a) Manganese(II) sulphate, sulphuric acid and phosphoric acid
- (b) Magnesium (II) sulphate, sulphuric acid and phosphorus acid
- (c) Zinc (II) Sulphate, sulphuric acid and phosphoric acid
- (d) Nickel (II) Sulphate, sulphuric acid and phosphorus acid

Options :

- 12820644319. A
- 12820644320. B
- 12820644321. C
- 12820644322. D

Question Number : 20 Question Id : 12820611216 Question Type : MCQ Option Shuffling : No Display Question Number : Yes

Single Line Question Option : No Option Orientation : Vertical

Correct Marks : 2 Wrong Marks : 0

The pH that should be maintained for the complexometric titration of Mg^{2+} and Ca^{2+} with EDTA would be in the range of:

- (a) 4-6.
- (b) 9-10.
- (c) 13-14.
- (d) 1-3.

Options :

- 12820644323. A
- 12820644324. B

Question Number : 21 Question Id : 12820611217 Question Type : MCQ Option Shuffling : No Display Question Number : Yes
Single Line Question Option : No Option Orientation : Vertical
Correct Marks : 2 Wrong Marks : 0

The pH of 0.1(M) aqueous acetic acid solution ($k_a = 1.75 \times 10^{-5}$) is:

- (a) 4.60.
- (b) 2.88.
- (c) 3.33.
- (d) 6.80.

Options :

- 12820644327. A
- 12820644328. B
- 12820644329. C
- 12820644330. D

Question Number : 22 Question Id : 12820611218 Question Type : MCQ Option Shuffling : No Display Question Number : Yes
Single Line Question Option : No Option Orientation : Vertical
Correct Marks : 2 Wrong Marks : 0

2-Acetoxy benzoic acid is commonly known as:

- (a) Paracetamol.
- (b) Ibuprofen.
- (c) Aspirin.
- (d) Wintergreen oil.

Options :

- 12820644331. A
- 12820644332. B
- 12820644333. C
- 12820644334. D

Question Number : 23 Question Id : 12820611219 Question Type : MCQ Option Shuffling : No Display Question Number : Yes
Single Line Question Option : No Option Orientation : Vertical
Correct Marks : 2 Wrong Marks : 0

Which of the changes below occurs with the greatest increase in entropy?

- (a) $\text{Na}_2\text{O(s)} + \text{H}_2\text{O(l)} \rightarrow 2\text{Na}^+(\text{aq}) + 2\text{OH}^-(\text{aq})$
- (b) $\text{NH}_3(\text{g}) + \text{HCl(g)} \rightarrow \text{NH}_4\text{Cl(s)}$
- (c) $\text{H}_2(\text{g}) + \text{I}_2(\text{g}) \rightarrow 2\text{HI(g)}$
- (d) $\text{C(s)} + \text{CO}_2(\text{g}) \rightarrow 2\text{CO(g)}$

Options :

- 12820644335. A

Question Number : 24 Question Id : 12820611220 Question Type : MCQ Option Shuffling : No Display Question Number : Yes
Single Line Question Option : No Option Orientation : Vertical
Correct Marks : 2 Wrong Marks : 0

A specimen is imaged in a fluorescence microscope using 532 nm excitation laser light. If an objective of numerical aperture (NA) of 1 is used to image the specimen then the minimum *spatial resolution* (XY-resolution) of the image will be:

- (a) 1000 nm
- (b) 1 nm
- (c) 22 nm
- (d) 266 nm

Options :

12820644339. A
12820644340. B
12820644341. C
12820644342. D

Question Number : 25 Question Id : 12820611221 Question Type : MCQ Option Shuffling : No Display Question Number : Yes
Single Line Question Option : No Option Orientation : Vertical
Correct Marks : 2 Wrong Marks : 0

Victor Meyer test is commonly employed for the confirmation of:

- (a) 1°, 2°, 3° amines
- (b) Carbonyl group
- (c) 1°, 2°, 3° alcohols
- (d) 2° and 3° alcohols only

Options :

12820644343. A
12820644344. B
12820644345. C
12820644346. D

PART B

Section Id :	128206320
Section Number :	2
Section type :	Online
Mandatory or Optional:	Mandatory
Number of Questions:	25
Number of Questions to be attempted:	25
Section Marks:	50

Sub-Section Number: 1
Sub-Section Id: 128206516
Question Shuffling Allowed : Yes

Question Number : 26 Question Id : 12820611222 Question Type : MCQ Option Shuffling : No Display Question Number : Yes
Single Line Question Option : No Option Orientation : Vertical

Correct Marks : 2 Wrong Marks : 0

In the reaction of R-OH with SOCl_2 in the presence of pyridine, the final product is **A**, the reaction follows **B** and the reaction is called **C**:

- (a) A: R-SO₂Cl, B: Inversion of configuration and C: S_N2
- (b) A: R-SO₂, B: Inversion of configuration and C: S_Ni
- (c) A: R-SO₃H, B: Retention of configuration and C: S_N2
- (d) A: R-Cl, B: Retention of configuration and C: S_Ni

Options :

- 12820644347. A
- 12820644348. B
- 12820644349. C
- 12820644350. D

Question Number : 27 Question Id : 12820611223 Question Type : MCQ Option Shuffling : No Display Question Number : Yes
Single Line Question Option : No Option Orientation : Vertical

Correct Marks : 2 Wrong Marks : 0

A phenolic ester is heated with Friedel-Crafts catalyst like AlCl_3 . The products formed are:

- (a) *o*- and *p*-acylphenols.
- (b) *o*-, *m*- and *p*-acylphenols.
- (c) phenol.
- (d) alkylated phenols.

Options :

- 12820644351. A
- 12820644352. B
- 12820644353. C
- 12820644354. D

Question Number : 28 Question Id : 12820611224 Question Type : MCQ Option Shuffling : No Display Question Number : Yes
Single Line Question Option : No Option Orientation : Vertical

Correct Marks : 2 Wrong Marks : 0

- (a) Greater due to the anomeric effect and also the dipoles are not parallel.
- (b) Smaller due to the anomeric effect and also the dipoles parallel.
- (c) Greater due to the anomeric effect and also the dipoles are parallel.
- (d) Smaller due to the anomeric effect and also the dipoles are not parallel.

Options :

- 12820644355. A
- 12820644356. B
- 12820644357. C
- 12820644358. D

Question Number : 29 Question Id : 12820611225 Question Type : MCQ Option Shuffling : No Display Question Number : Yes
Single Line Question Option : No Option Orientation : Vertical

Correct Marks : 2 Wrong Marks : 0

Which of the following species can act as Bronsted acid as well as Bronsted base?

- I. NH_2^-
- II. HCO_3^-
- III. NH_4^+
- IV. HSO_4^-

- (a) I, II & IV
- (b) I, III & IV
- (c) II & IV
- (d) I & III


Options :

- 12820644359. A
- 12820644360. B
- 12820644361. C
- 12820644362. D

Question Number : 30 Question Id : 12820611226 Question Type : MCQ Option Shuffling : No Display Question Number : Yes
Single Line Question Option : No Option Orientation : Vertical

Correct Marks : 2 Wrong Marks : 0

The stereochemistry of the molecules shown below is:



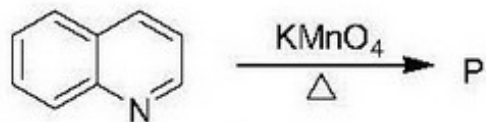
- (a) R and R.
- (b) S and S.
- (c) ~~S and R.~~
- (d) R and S.

12820644364. B
12820644365. C
12820644366. D

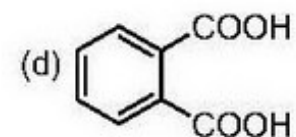
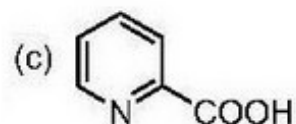
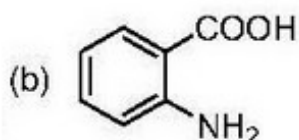
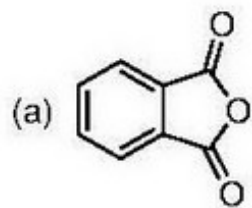
Question Number : 31 Question Id : 12820611227 Question Type : MCQ Option Shuffling : No Display Question Number : Yes
Single Line Question Option : No Option Orientation : Vertical

Correct Marks : 2 Wrong Marks : 0

In the reaction,



The product P is:

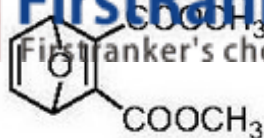


Options :

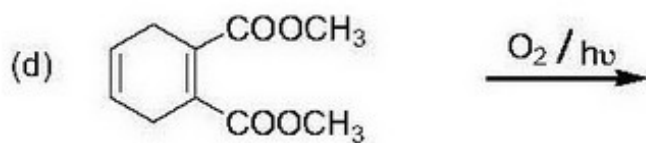
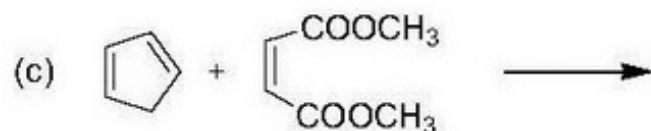
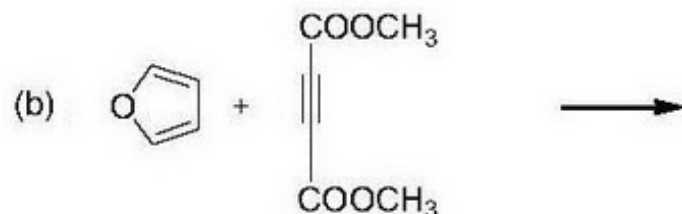
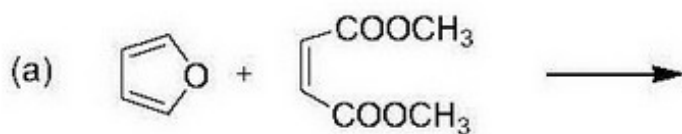
12820644367. A
12820644368. B
12820644369. C
12820644370. D

Question Number : 32 Question Id : 12820611228 Question Type : MCQ Option Shuffling : No Display Question Number : Yes
Single Line Question Option : No Option Orientation : Vertical

Correct Marks : 2 Wrong Marks : 0



Which one of the following will yield the above product?



Options :

12820644371. A

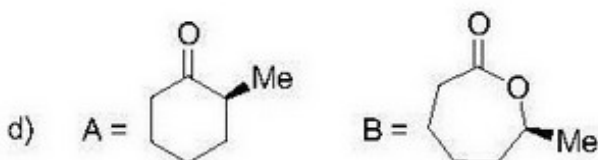
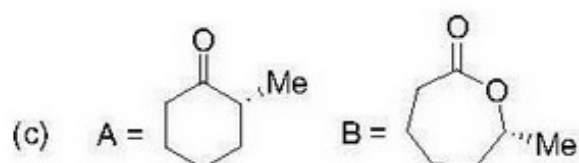
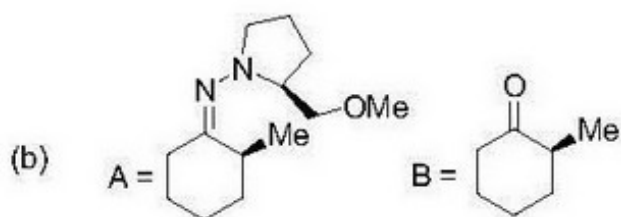
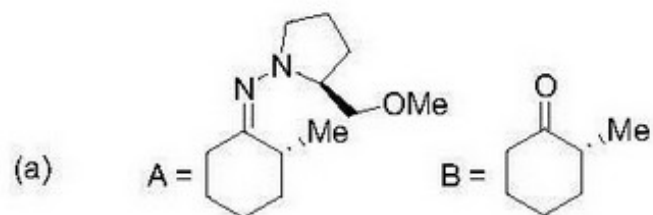
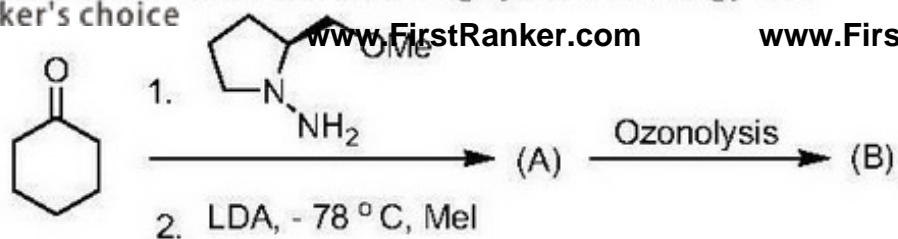
12820644372. B

12820644373. C

12820644374. D

Question Number : 33 Question Id : 12820611229 Question Type : MCQ Option Shuffling : No Display Question Number : Yes
Single Line Question Option : No Option Orientation : Vertical

Correct Marks : 2 Wrong Marks : 0



Options :

12820644375. A

12820644376. B

12820644377. C

12820644378. D

Question Number : 34 Question Id : 12820611230 Question Type : MCQ Option Shuffling : No Display Question Number : Yes
Single Line Question Option : No Option Orientation : Vertical

Correct Marks : 2 Wrong Marks : 0

Predict the increasing order of bond angles in H_2O , NH_3 , PH_3 and OCl_2 :

(a) $\text{PH}_3 < \text{H}_2\text{O} < \text{NH}_3 < \text{OCl}_2$

(b) $\text{NH}_3 < \text{H}_2\text{O} < \text{OCl}_2 < \text{PH}_3$

(c) $\text{H}_2\text{O} < \text{OCl}_2 < \text{NH}_3 < \text{PH}_3$

(d) $\text{PH}_3 < \text{OCl}_2 < \text{NH}_3 < \text{H}_2\text{O}$

Options :

12820644379. A

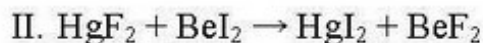
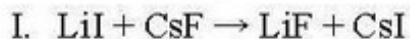
12820644380. B

Question Number : 35 Question Id : 12820611231 Question Type : MCQ Option Shuffling : No Display Question Number : Yes
Single Line Question Option : No Option Orientation : Vertical

Correct Marks : 2 Wrong Marks : 0

Using Hard-Soft Acid-Base (HSAB) concept, predict the direction of the following reactions.

Assume gas-phase reaction at 25 °C or in an inert solvent:



- (a) I = Forward; II = Forward
- (b) I = Forward; II = Backward
- (c) I = Backward; II = Backward
- (d) I = Backward; II = Forward

Options :

12820644383. A

12820644384. B

12820644385. C

12820644386. D

Question Number : 36 Question Id : 12820611232 Question Type : MCQ Option Shuffling : No Display Question Number : Yes
Single Line Question Option : No Option Orientation : Vertical

Correct Marks : 2 Wrong Marks : 0

Based on the isolobal analogy, choose the group that might replace the group underlined in



- (a) CH_2
- (b) BH_2
- (c) CCH_3
- (d) I

Options :

12820644387. A

12820644388. B

12820644389. C

12820644390. D

Question Number : 37 Question Id : 12820611233 Question Type : MCQ Option Shuffling : No Display Question Number : Yes
Single Line Question Option : No Option Orientation : Vertical

Correct Marks : 2 Wrong Marks : 0

- (a) Olefin addition to $\text{Rh}(\text{PPh}_3)_2\text{Cl}$.
- (b) Olefin addition to $\text{Rh}(\text{PPh}_3)_3\text{Cl}$.
- (c) A phosphine dissociation from $\text{Rh}(\text{PPh}_3)_3\text{Cl}$.
- (d) A phosphine addition to $\text{Rh}(\text{PPh}_3)_2\text{Cl}$.

Options :

- 12820644391. A
- 12820644392. B
- 12820644393. C
- 12820644394. D

Question Number : 38 Question Id : 12820611234 Question Type : MCQ Option Shuffling : No Display Question Number : Yes
Single Line Question Option : No Option Orientation : Vertical

Correct Marks : 2 Wrong Marks : 0

Why does the absorption spectrum of aqueous $[\text{Ti}(\text{H}_2\text{O})_6]^{3+}$ exhibit a broad band with a shoulder?

- (a) The ground state of $[\text{Ti}(\text{H}_2\text{O})_6]^{3+}$ is Jahn-Teller distorted.
- (b) The excited state of $[\text{Ti}(\text{H}_2\text{O})_6]^{3+}$ undergoes Jahn-Teller distortion.
- (c) $[\text{Ti}(\text{H}_2\text{O})_6]^{3+}$ is a d^2 ion and therefore there are two absorptions.
- (d) $[\text{Ti}(\text{H}_2\text{O})_6]^{3+}$ is partly reduced to $[\text{Ti}(\text{H}_2\text{O})_6]^{2+}$ in aqueous solution and two absorptions which are close in energy are observed, one for each species.

Options :

- 12820644395. A
- 12820644396. B
- 12820644397. C
- 12820644398. D

Question Number : 39 Question Id : 12820611235 Question Type : MCQ Option Shuffling : No Display Question Number : Yes
Single Line Question Option : No Option Orientation : Vertical

Correct Marks : 2 Wrong Marks : 0

The ground state term and magnetic moment of Tb^{3+} ion are:

- (a) 7F_6 and 9.72 B. M., respectively.
- (b) 2F_6 and 2.54 B. M., respectively.
- (c) $^6H_{5/2}$ and 0.85 B. M., respectively.
- (d) 3H_6 and 7.56 B. M., Respectively

Options :

- 12820644399. A
- 12820644400. B
- 12820644401. C
- 12820644402. D

Metal centers of following enzymes

(i) Superoxide dimutase and (ii) Nitrogenase are:

- (a) (i) Cu and Zn and (ii) Mo and Fe, respectively
- (b) (i) Mn and Zn and (ii) Zn and Fe, respectively
- (c) (i) Co and Zn and (ii) Cu and Fe, respectively
- (d) (i) Mg and Zn and (ii) Mn and Fe, respectively

Options :

12820644403. A

12820644404. B

12820644405. C

12820644406. D

Question Number : 41 Question Id : 12820611237 Question Type : MCQ Option Shuffling : No Display Question Number : Yes
Single Line Question Option : No Option Orientation : Vertical

Correct Marks : 2 Wrong Marks : 0

The geometries of following molecules

(i) B_5H_9 , (ii) $[B_6H_9]^-$ and (iii) $[B_9H_9]^{2-}$ are:

- (a) (i) Square pyramid, (ii) Pentagonal pyramid and (iii) Tricapped trigonal prism, respectively.
- (b) (i) Trigonal bipyramid, (ii) Octahedral and (iii) Tricapped trigonal prism, respectively.
- (c) (i) Square pyramid, (ii) Octahedral and (iii) Tricapped trigonal prism, respectively.
- (d) (i) Trigonal bipyramid, (ii) Pentagonal pyramid and (iii) Tricapped trigonal prism, respectively.

Options :

12820644407. A

12820644408. B

12820644409. C

12820644410. D

Question Number : 42 Question Id : 12820611238 Question Type : MCQ Option Shuffling : No Display Question Number : Yes
Single Line Question Option : No Option Orientation : Vertical

Correct Marks : 2 Wrong Marks : 0

- (a) $\hat{H} = \frac{h^2}{8\pi^2\mu_e} \nabla^2 + \frac{e^2}{4\pi\epsilon_0 r}$
- (b) $\hat{H} = -\frac{h^2}{4\pi^2\mu_e} \nabla^2 + \frac{e^3}{4\pi\epsilon_0 r}$
- (c) $\hat{H} = -\frac{h^2}{8\pi^2\mu_e} \nabla^2 - \frac{e^2}{4\pi\epsilon_0 r}$
- (d) $\hat{H} = \frac{h^2}{8\pi^2\mu_e} \nabla^2 - \frac{e^3}{4\pi\epsilon_0 r}$

Options :

12820644411. A

12820644412. B



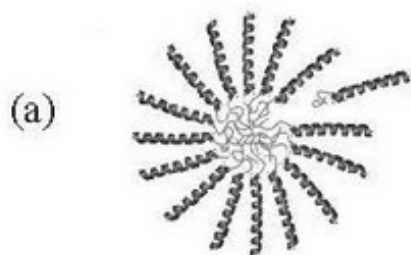
12820644413. C

12820644414. D

Question Number : 43 Question Id : 12820611239 Question Type : MCQ Option Shuffling : No Display Question Number : Yes
 Single Line Question Option : No Option Orientation : Vertical

Correct Marks : 2 Wrong Marks : 0

Which of the following pictures is appropriate for *cyclodextrin* structure?



Options :

Question Number : 44 Question Id : 12820611240 Question Type : MCQ Option Shuffling : No Display Question Number : Yes
Single Line Question Option : No Option Orientation : Vertical

Correct Marks : 2 Wrong Marks : 0

The half life of a chemical reaction is found to be inversely proportional to the cube of initial concentration of reactant. The order of the reaction is:

- (a) 2.
- (b) 3.
- (c) 4.
- (d) 5.

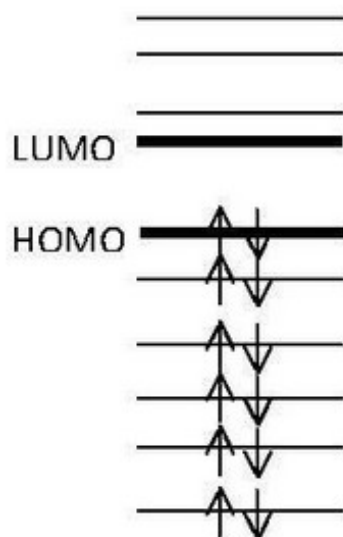
Options :

- 12820644419. A
- 12820644420. B
- 12820644421. C
- 12820644422. D

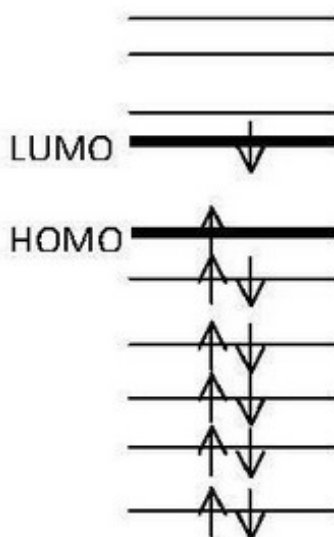
Question Number : 45 Question Id : 12820611241 Question Type : MCQ Option Shuffling : No Display Question Number : Yes
Single Line Question Option : No Option Orientation : Vertical

Correct Marks : 2 Wrong Marks : 0

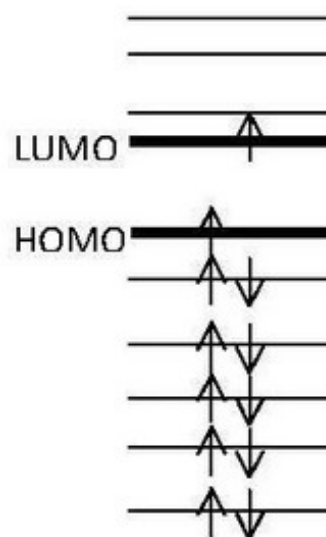
www.FirstRanker.com



A



B



C

The energy of transitions between the states follows the following correct order:

- (a) $B \rightarrow A > A \rightarrow B > B \rightarrow C$
- (b) $A \rightarrow B > B \rightarrow A > C \rightarrow A$
- (c) $A \rightarrow B > B \rightarrow C > C \rightarrow A$
- (d) $B \rightarrow A > C \rightarrow A > A \rightarrow B$

Options :

- 12820644423. A
- 12820644424. B
- 12820644425. C
- 12820644426. D

Question Number : 46 Question Id : 12820611242 Question Type : MCQ Option Shuffling : No Display Question Number : Yes
Single Line Question Option : No Option Orientation : Vertical
Correct Marks : 2 Wrong Marks : 0

The independent variable in an experiment is:

- (a) The variable you hope to observe in an experiment.
- (b) The variable you change in an experiment.
- (c) The variable that isn't changed in an experiment.
- (d) none of these is correct.

Options :

- 12820644427. A
- 12820644428. B
- 12820644429. C
- 12820644430. D

Question Number : 47 Question Id : 12820611243 Question Type : MCQ Option Shuffling : No Display Question Number : Yes
Single Line Question Option : No Option Orientation : Vertical
Correct Marks : 2 Wrong Marks : 0

- (a) hydrogen electrode – quinone/hydroquinone electrode.
- (b) glass electrode – hydrogen electrode.
- (c) calomel – silver/silver chloride electrode.
- (d) hydrogen electrode – silver/silver chloride electrode.

Options :

- 12820644431. A
- 12820644432. B
- 12820644433. C
- 12820644434. D

Question Number : 48 Question Id : 12820611244 Question Type : MCQ Option Shuffling : No Display Question Number : Yes
Single Line Question Option : No Option Orientation : Vertical

Correct Marks : 2 Wrong Marks : 0

If you have 30 grams of lithium hydroxide dissolved to make 3L of a solution, the molarity of this solution is:

- (a) 0.42 M.
- (b) 1.26 M.
- (c) 10.0 M.
- (d) 20.0 M.

Options :

- 12820644435. A
- 12820644436. B
- 12820644437. C
- 12820644438. D

Question Number : 49 Question Id : 12820611245 Question Type : MCQ Option Shuffling : No Display Question Number : Yes
Single Line Question Option : No Option Orientation : Vertical

Correct Marks : 2 Wrong Marks : 0

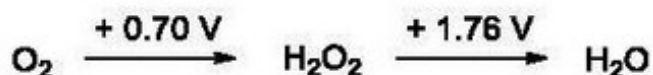
With increasing temperature, the surface tension:

- (a) Increases, then decreases.
- (b) Decreases, then increases.
- (c) Decreases.
- (d) Increases.

Options :

- 12820644439. A
- 12820644440. B
- 12820644441. C
- 12820644442. D

Question Number : 50 Question Id : 12820611246 Question Type : MCQ Option Shuffling : No Display Question Number : Yes
Single Line Question Option : No Option Orientation : Vertical



What is your anticipation about the above diagram?

- (a) H_2O_2 should disproportionate into O_2 and H_2O , and the equilibrium constant (K_{eq}) of the reaction is >1 .
- (b) H_2O_2 should disproportionate into O_2 and H_2O , and the equilibrium constant (K_{eq}) of the reaction is <1 .
- (c) H_2O_2 should not disproportionate into O_2 and H_2O , and the equilibrium constant (K_{eq}) of the reaction is >1 .
- (d) H_2O_2 should not disproportionate into O_2 and H_2O , and the equilibrium constant (K_{eq}) of the reaction is <1 .

Options :

- 12820644443. A
- 12820644444. B
- 12820644445. C
- 12820644446. D