

Printed Pages : 4



EC401(MTU)

(Following Paper ID and Roll No. to be filled in your Answer Book)

PAPER ID : 130401

Roll No.

--	--	--	--	--	--	--	--	--	--

B. Tech.

(SEM. IV) THEORY EXAMINATION, 2014-15
ELECTRONICS CIRCUITS

Time : 3 Hours]

[Total Marks : 100

- Note :** (1) Attempt all questions.
(2) All questions carry equal marks.

1 Attempt any four parts of following : 5×4=20

- (a) Derive an expression for the voltage gain, v_o/v_i of the circuit in the Figure 1.1

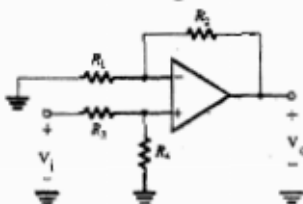


Figure 1.1

- (b) Discuss how the performance of an OP-AMP is affected by the open loop gain of amplifier.

[1425]

130401]

1

[Contd...

- (c) Describe the difference between inverting and non-inverting amplifier.
- (d) Derive an expression for the input resistance of the inverting amplifier of the Figure 1.2 taking into account the finite open loop gain A of the OP-AMP.

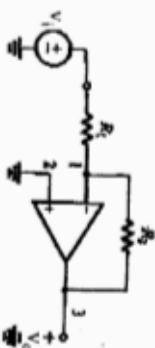


Figure 1.2

- (e) For an amplifier having a slew rate of $60 \text{ V}/\mu\text{s}$, what is the highest frequency at which a 20-V peak-to-peak sine wave can be produced at the output?
- (f) What are the ideal characteristics of op-amp? Explain the concept of voltage follower.

2

Attempt any four parts of following :

5×4=20

- (a) Discuss the i_D - V_{DS} characteristics of n-channel enhancement type MOSFET. Indicate the three distinct regions of operation.
- (b) For a particular MOSFET operating in the saturation region at a constant V_{GS} , i_D is found to be 2 mA for $V_{DS} = 4 \text{ V}$ and 2.2 mA for $V_{DS} = 8 \text{ V}$. What values of r_o , V_A , and λ correspond?
- (c) What is bias stabilization? Explain the basic current mirror with suitable diagram.
- (d) For the CS amplifier, determine its high frequency transfer function.

1304011

2

[Contd...

- (e) The bias circuit of Figure 2.1 is used in a design with $V_0 = 5 \text{ V}$ and $R_s = 1 \text{ k}\Omega$. For an enhancement MOSFET with $k_n(W/L) = 2\text{mA/V}^2$, the source voltage was measured and found to be 2 V . What must V_t be for this device? If a device for which V_t is 0.5 V less is used, what does V_s become? What bias current results?

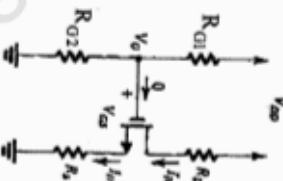


Figure 2.1

- (f) Draw the high frequency model of MOSFET and explain the MOS capacitances.

3

Attempt any two parts of following:

10×2=20

- (a) Why transistor action cannot be achieved by connecting two diodes back to back. Explain input and output characteristics of Common emitter BJT. A pnp transistor operates with an emitter-to-collector voltage of 5 V , an emitter current of 10 A , and $V_{EB} = 0.85 \text{ V}$. For $\beta = 15$, what base current is required? What is I_s for this transistor? Compare the emitter-base junction area of this transistor with that of a small-signal transistor that conducts $i_c = 1 \text{ mA}$ with $V_{EB} = 0.70 \text{ V}$. How much larger is it?

1304011

3

[Contd...

- (e) What is emitter stabilization in self-bias circuit of an npn transistor in CE amplifier? Explain the high frequency response of common emitter amplifier.

4 Attempt any two parts of following : **10X2=20**

- Explain the small signal operation of BJT differential pair and derive the expressions for differential input resistance and gain.
- Explain CS MOS differential pair and discuss the non ideal characteristics of MOS differential pair.
- Calculate the output resistance and CMRR for active loaded BJT differential pair.

5 Attempt any two parts of following : **10X2=20**

- Draw a neat sketch of a generalized resonant circuit oscillator using three impedances. Explain Hartley oscillator and derive the frequency of oscillation.
- Define the Barkhausen criterion for oscillation. Derive an expression for frequency of oscillation of Wein bridge oscillator.
- Discuss the effect of negative feedback on noise and Bandwidth of an amplifier. Calculate the gain, input resistance and output resistance of trans-resistance amplifier.

Printed Pages : 4



(Following Paper ID and Roll No)

PAPER ID : 130401

Roll No.

B. 7

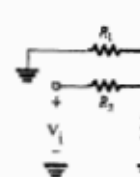
(SEM. IV) THEORY E
ELECTRONICS

Time : 3 Hours]

Note : (1) Attempt all qu
(2) All questions

1 Attempt any four parts of

- Derive an expression of the circuit in the



Fig

- Discuss how the per affected by the ope

130401]

4

[1425]

130401]