

Code No: A109210501

R09**Set No. 2**

II B.Tech I Semester Examinations, November 2010
MATHEMATICAL FOUNDATIONS OF COMPUTER SCIENCE
 Common to Information Technology, Computer Science And Engineering
 Time: 3 hours Max Marks: 75

Answer any FIVE Questions
 All Questions carry equal marks

1. (a) Prove or disprove the validity of the following arguments using the rules of inference.
 All men are fallible
 All kings are men
 Therefore, all kings are fallible
- (b) Show that $(\exists x) (p(x) \wedge Q(x)) \Rightarrow (\exists x) (p(x) \wedge \exists (x) Q(x))$. [15]
2. (a) Draw a planar representation of the following graph. Figure 1.
- (b) What do you mean by a spanning tree? Explain DFS method for finding a spanning tree for the graph. [15]

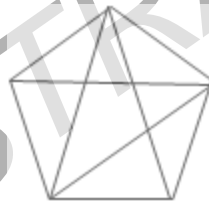


Figure 1:

3. (a) Show that the following statements are logically equivalent without using truth table.
 $\neg(P \vee (\neg P \wedge Q)) \Leftrightarrow \neg P \wedge \neg Q$
- (b) Show that the following statements is a tautology.
 $(\neg P \wedge (P \rightarrow Q)) \rightarrow \neg Q$ [15]
4. Find the general solution for the recurrence relation $a_n - a_{n-1} = 4(n + n^3)$, where $n \geq 1$, and $a_0 = 5$ [15]
5. (a) Using the binomial theorem to prove that

$$3^n = \sum_{r=0}^n c(n, r) 2^r.$$
- (b) If $x > 2$, $y > 0$, $z > 0$ then find the number of solutions of $x + y + z + w = 21$. [15]
6. (a) Write an algorithm to determine if a connected graph is Eulerian, using its adjacency list representation.
- (b) Write an algorithm to determine if a connected graph contains an Eulerian path, using its adjacency matrix. [15]

Code No: A109210501

R09

Set No. 2

7. Prove the theorem: Every equivalence relation R on a set generates a unique partition of the set. The blocks of this partition correspond to the R equivalence classes. [15]
8. If $(G, *)$ and (H, Δ) are two groups and $f: G \rightarrow H$ is homomorphism, then prove that the kernel of 'f' is a normal subgroup. [15]

FIRSTRANKER

Code No: A109210501

R09**Set No. 4**

II B.Tech I Semester Examinations, November 2010
MATHEMATICAL FOUNDATIONS OF COMPUTER SCIENCE
Common to Information Technology, Computer Science And Engineering
Time: 3 hours **Max Marks: 75**

Answer any FIVE Questions
All Questions carry equal marks

1. (a) State the binomial theorem.
 (b) Show that the number of r-permutations of a set of n (distinct) elements is given by $P(n,r) = n!/(n-r)!$ [5+10]
2. (a) Prove that $H = \{0,2,4\}$ forms a sub group of $\langle Z_6, +_6 \rangle$.
 (b) Consider the group $G = \{1,2,4,7,8,11,13,14\}$ under multiplication modulo 15. Construct the multiplication table of G and verify whether G is cycle or not. [7+8]
3. (a) Construct the truth table for the following statement
 $(\neg P \leftrightarrow \neg Q) \leftrightarrow (Q \leftrightarrow R)$
 (b) Show that the following statements are logically equivalent without using truth table.
 $(P \rightarrow Q) \wedge (P \rightarrow R) \Leftrightarrow P \rightarrow (Q \wedge R)$ [15]
4. (a) Prove that if G is a plane graph, then the sum of the degrees of the regions determined by G is $2|E|$, where $|E|$ is the number of edges of G.
 (b) Determine if bipartite graph $K_{2,2}$ is planar or not. [15]
5. (a) Give an example to show that $(x)(A(x) \wedge B(x))$ need not be a conclusion form $(\exists x)A(x)$ and $(\exists x)B(x)$.
 (b) Show that $(\exists x) M(x)$ follows logically from the premises
 $(x) H(x) \rightarrow M(x)$ and $(\exists x) H(x)$. [15]
6. (a) A function $f(Z \times Z) \rightarrow Z$ is defined by $f(x,y) = 4x = 5y$. Prove that f is not one-to-one, but onto
 (b) If A,B,C are three sets such that $A \subseteq B$. Show that $(A \times C) \subseteq (B \times C)$
 (c) If $A = \{1,2,3\}$, $B = \{4,5\}$. Find
 i. $A \times B$
 ii. $B \times A$ [15]
7. (a) State and prove Five Colour theorem.
 (b) Find a subgraph of G which is isomorphic to $K_{3,3}$. [15]
8. (a) Solve the recurrence relation $u_{n+2} + 4u_{n+1} + 3u_n = 5(-2)^n$, $u_0 = 1$, $u_1 = 0$ using generating function.

Code No: A109210501

R09

Set No. 4

(b) Solve the recurrence relation $u_{n+2}-u_{n+1}-12u_n=10$, $u_1=\frac{1}{3}$, $u_0=0$. [15]

FIRSTRANKER

Code No: A109210501

R09**Set No. 1**

II B.Tech I Semester Examinations, November 2010
MATHEMATICAL FOUNDATIONS OF COMPUTER SCIENCE
 Common to Information Technology, Computer Science And Engineering
Time: 3 hours **Max Marks: 75**

Answer any FIVE Questions
 All Questions carry equal marks

1. (a) Determine the truth value of each of the following statements
 - i. $6 + 2 = 7$ and $4 + 4 = 8$.
 - ii. four is even.
 - iii. $4 + 3 = 7$ and $6 + 2 = 8$.
 (b) Write each of the following statements in symbolic form
 - i. Anil & Sunil are rich.
 - ii. Neither Ramu nor Raju is poor.
 - iii. It is not true that Ravi & Raju are both rich.
 (c) Write a short note on normal forms [15]
2. (a) Give an example of a connected graph G where removing any edge of G results in a disconnected graph.
 (b) Give an example for a bipartite graph with examples.
 (c) Discuss graph coloring problem with required examples. [15]
3. (a) Find the number of positive integers less than or equal to 2076 and divisible by 3 or 4.
 (b) Find the coefficient of x^4y^7 in the expansion of $(x-y)^{11}$. [15]
4. (a) Find the generating function of n^2-2 .
 (b) Solve $a_n = a_{n-1} + n$, where $a_0 = 2$ by substitution [15]
5. (a) Let $f(x) = x^2-3x+2$. Find
 - i. $f(x^2)$
 - ii. $f(x+3)$
 (b) Prove that $A - (B \cap C) = (A - B) \cup (A - C)$
 (c) Define equivalence relation [15]
6. (a) Show that if a plane graph is self-dual, then $|E| = 2|V| - 2$
 (b) Give the adjacency matrix of the digraph $G = (\{a,b,c,d\}, R)$, where $R = \{(a,b), (b,c), (d,c), (d,a)\}$. [15]
7. In a symmetric group S_3 find those elements of a and b, such that
 - (a) $a^2 = e$

Code No: A109210501

R09

Set No. 1

(b) $a^3 = e$

(c) $(a+b)^2 \neq a^2 * b^2$. [15]

8. (a) Is the following conclusion validly derivable from the premises given? Verify.
If $(x)(P(x) \rightarrow Q(x))$, $(\exists y)P(y)$ then $(\exists z)Q(z)$.
- (b) Prove that $(x)(H(x) \rightarrow A(x)) \Rightarrow (x)((\exists y)(H(y) \wedge N(x, y)) \rightarrow (\exists y)(A(y) \wedge N(x, y)))$. [15]

FIRSTRANKER

Code No: A109210501

R09**Set No. 3**

II B.Tech I Semester Examinations, November 2010
MATHEMATICAL FOUNDATIONS OF COMPUTER SCIENCE
Common to Information Technology, Computer Science And Engineering
Time: 3 hours **Max Marks: 75**

Answer any FIVE Questions
All Questions carry equal marks

1. (a) Let $f:Z \rightarrow N$ be defined by

$$F(x) = \begin{cases} 2x-1 & \text{if } x > 0 \\ -2x & \text{if } x \leq 0 \end{cases}$$
- (b) Let $A = \{0,1,2,3,4\}$. Show that the relation $R = \{(0,0), (0,4), (1,1), (1,3), (2,2), (3,1), (3,3), (4,0), (4,4)\}$ is an equivalence relation. Find the distinct equivalence classes of R . [15]
2. (a) Using Krushall's algorithm, find a minimal spanning tree for the graph given in the following table.

Weight	7	10	10	11	12	12	13	13	13	15
Edges	(a, b)	(a, d)	(b, d)	(b, e)	(a, e)	(c, e)	(b, c)	(c, d)	(d, e)	(a, c)
- (b) Prove that a connected plane graph with 7 vertices and $\text{degree}(V) = 4$ for each vertex V of G must have 8 regions of degree 3 and one region of degree 4. [15]
3. Obtain the PCNF of the following formula $(\neg P \rightarrow R) \wedge (Q \leftrightarrow P)$
 - (a) Using Truth Table.
 - (b) Without using Truth Table. [15]
4. (a) Show that the set $G = \{1,2,3,4,5\}$ is not a group under addition and multiplication modulo 6 (i.e. X_6 and $+_6$).
- (b) If G is the set of all matrices of the type $\begin{pmatrix} a & 0 \\ 0 & a^{-1} \end{pmatrix}$ where $a \neq e$. Prove that G is an abelian group under matrix multiplication. [15]
5. (a) Applying the multiplication principle show that a set S with n elements has 2^n subsets.
- (b) One type of automobile license plate number in Masachusetts consists of one letter and five digits. Compute the number of such license plate numbers possible. [15]
6. (a) Prove or disprove the conclusion given below from the following axioms. If Socrates is a man, then Socrates is mortal. Socrates is a man. Therefore, Socrates is mortal.
- (b) Using proof by contradiction show that $\sqrt{2}$ is not a rational number. [15]
7. (a) Find the generating function of $(n-1)^2$.
- (b) Solve the difference equation $u_n - 2u_{n-1} = 5 \cdot (2)^n$ using generating function. [15]

Code No: A109210501

R09**Set No. 3**

8. (a) Find whether the following (figure 2) is Hamiltonian or Eulerian. If so find the cycle otherwise write the reason.

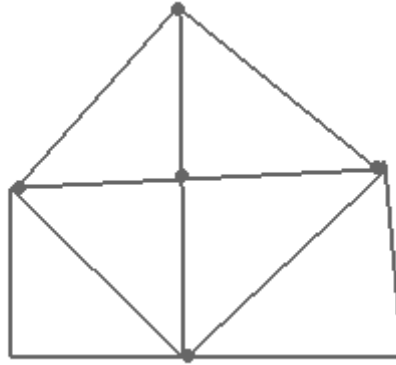


Figure 2:

- (b) Find the chromatic number of the following graph (figure 3). [15]

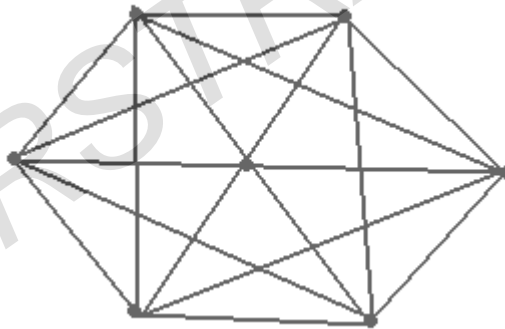


Figure 3:
