

**ENGINEERING DRAWING**

(Common to ECE, EIE, Bio-Tech, EComE, Agri.E)

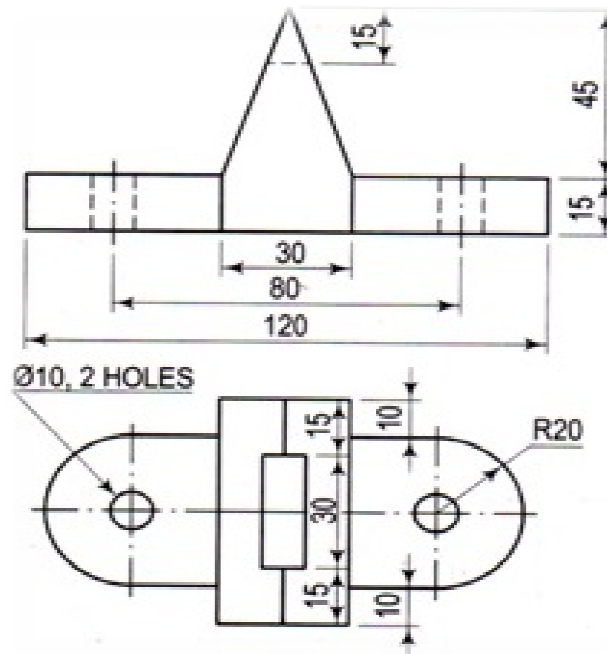
**Time: 3 hours****Max. Marks: 70**

Question Paper Consists of **Part-A** and **Part-B**  
 Answering the question in **Part-A** is Compulsory,  
 Three Questions should be answered from **Part-B**

\*\*\*\*\*

**PART-A**

- 1.(a) Draw the isometric view of Fig.1.



Note: All dimensions are in mm.

Fig.1

- (b) Draw the projections of the straight line AB of 100 mm length when one of its ends is touching V.P and the other end is touching HP. The angles of inclination with H.P and V.P are  $40^\circ$  and  $50^\circ$  respectively.

[12+10]

**PART-B**

- 2.(a) The area of a field is 50000 sq m. The length and the breadth of the field, on the map is 10 cm and 8 cm respectively. Construct a diagonal scale which can read up to one metre. Mark the length of 235 metre on the scale. What is R.F of the scale?
- (b) The foci of an ellipse are 90 mm apart and the minor axis is 72 mm long. Determine the length of the major axis. Construct the ellipse.

[8+8]

- 
- Isometric view of a mechanical part with the following dimensions and features:
- Overall height: 72
  - Top flange width: 28
  - Top flange thickness: 28
  - Vertical section width: 24
  - Internal vertical section width: 16
  - Internal vertical section thickness: 8
  - Internal horizontal section width: 8
  - Internal horizontal section depth: 40
  - Internal fillet radius: R12
  - Internal horizontal section depth: 32
  - Internal vertical section width: 24
  - Internal fillet radius: R16
  - Internal horizontal section depth: 32
  - Overall width: 56
  - Overall depth: 84
  - Bottom fillet radius: R32
  - X-axis arrow pointing right.

Fig: 2

Subject Code: R13109/R13

Set No - 2

I B. Tech I Semester Regular Examinations Feb./Mar. - 2014

## ENGINEERING DRAWING

(Common to ECE, EIE, Bio-Tech, EComE, Agri.E)

Time: 3 hours

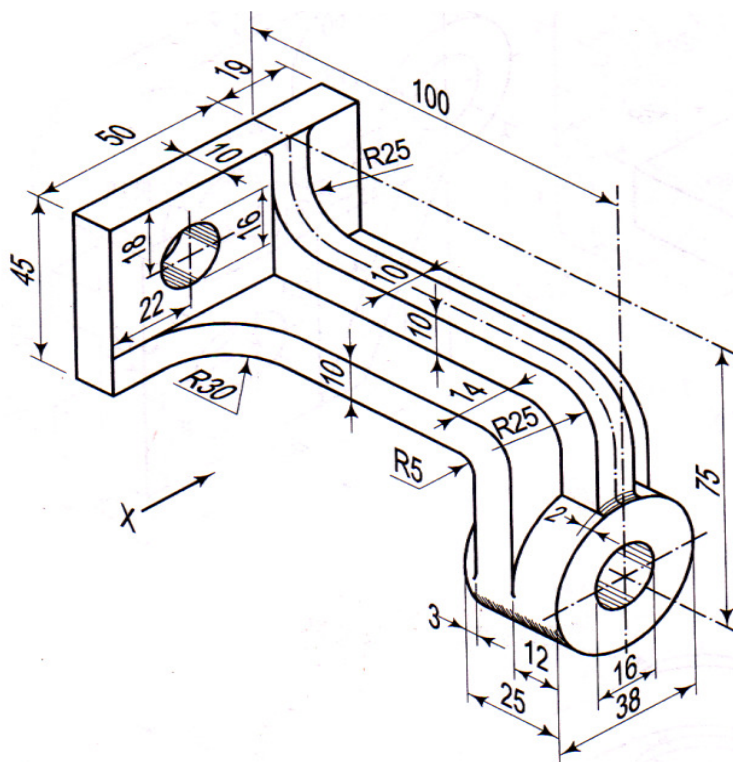
Max. Marks: 70

Question Paper Consists of **Part-A** and **Part-B**  
Answering the question in **Part-A** is Compulsory,  
Three Questions should be answered from **Part-B**

\*\*\*\*\*

### PART-A

- 1.(a) Draw (i) Front view (ii) Top view of Fig.1.



Note: All dimensions are in mm.

Fig.1

- (b) A circular plate of negligible thickness and 50 mm diameter appears as an ellipse in the front view, having its major axis 50 mm long and minor axis 30 mm long. Draw its top view when the major axis of the ellipse is horizontal.

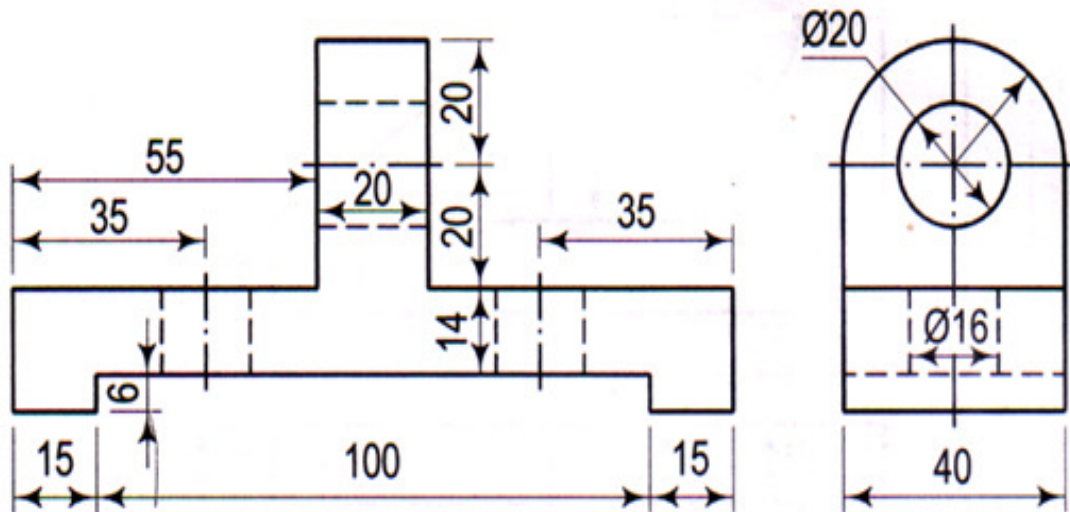
[12+10]

### PART-B

- 2.(a) Construct a vernier scale of R.F=1/80 to read inches and to measure up to 15 yards.  
(b) Construct a regular hexagon of side 28 mm when one side is horizontal.

[8+8]

- 3.(a) The top view of a 75 mm long line measures 55 mm. The line is in the V.P, its one end being 25 mm above the H.P. Draw its projections.
- (b) A point P is 15 mm above H.P and 20 mm in front of the V.P. Another point Q is 25 mm behind the V.P and 40 mm below the H.P. Draw projections of P and Q keeping the distance between their projectors equal to 90 mm. Draw straight lines joining (i) their top views and (ii) their front views. [8+8]
4. A line PQ, 100 mm long, is inclined at  $45^\circ$  to the H.P and at  $30^\circ$  to the V.P. Its end P is in the second quadrant and Q is in the fourth quadrant. A point R on PQ, 40 mm from P is in both the planes. Draw the projections of PQ. [16]
5. Draw the projections of a regular hexagon of 25 mm side, having one of its sides in the H.P and inclined at  $60^\circ$  to the V.P and its surface making an angle of  $45^\circ$  with the H.P. [16]
6. Draw the projections of a cone, base 75 mm diameter and axis 100 mm long, lying on the H.P on one of its generators with the axis parallel to the V.P. [16]
7. Draw the isometric view of Fig.2: [16]



Note: All dimensions are in mm.

Fig.2

**ENGINEERING DRAWING**

(Common to ECE, EIE, Bio-Tech, EComE, Agri.E)

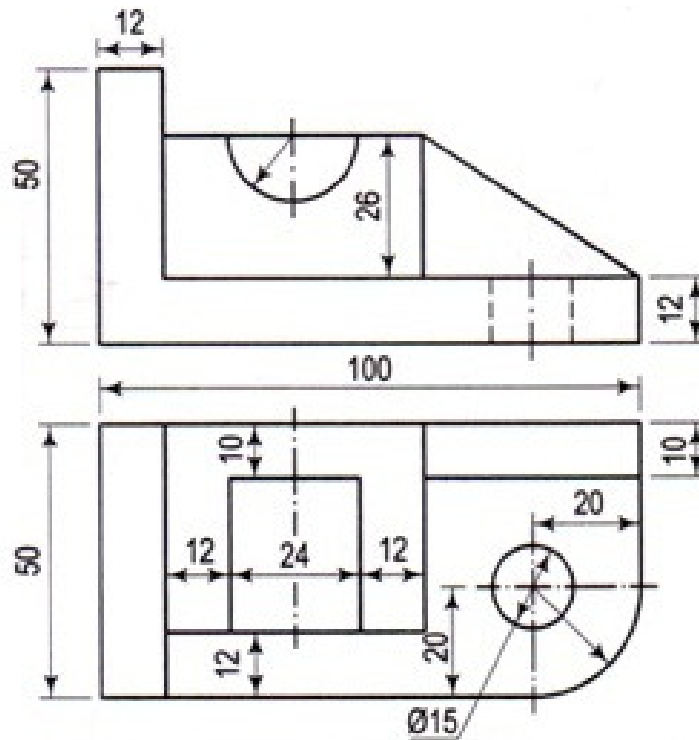
**Time: 3 hours****Max. Marks: 70**

Question Paper Consists of **Part-A** and **Part-B**  
 Answering the question in **Part-A** is Compulsory,  
 Three Questions should be answered from **Part-B**

\*\*\*\*\*

**PART-A**

- 1.(a) Draw the isometric view of Fig.1



Note: All dimensions are in mm.

Fig.1

- (b) A thin circular plate of 70 mm diameter is resting on its circumference such that its plane is inclined  $60^\circ$  to the H.P and  $30^\circ$  to the V.P. Draw the projections of the plate.

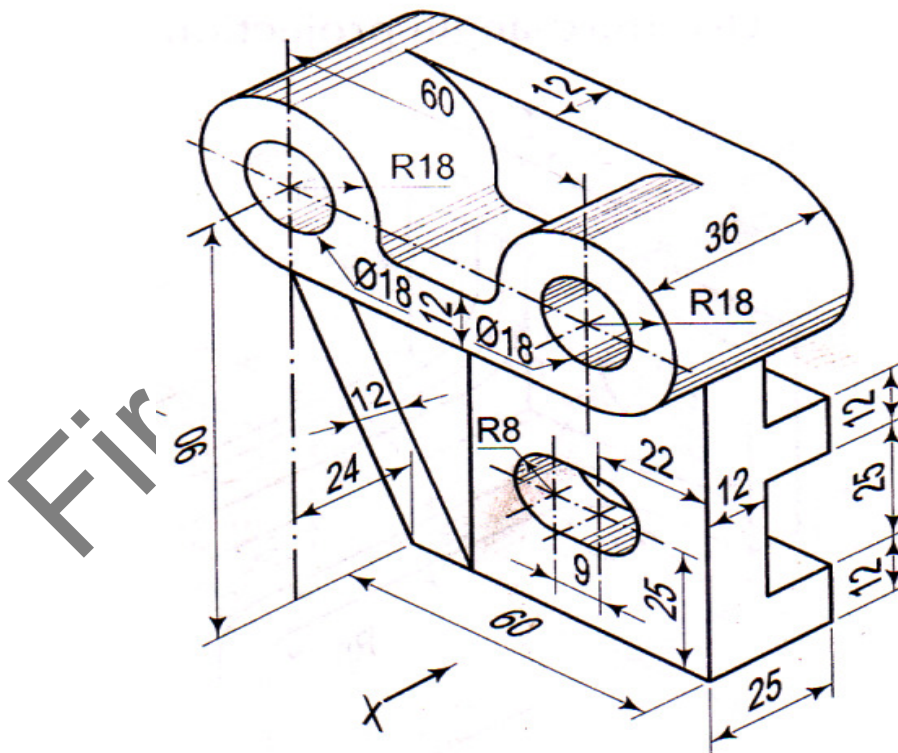
[12+10]

**PART-B**

2. (a) Construct a diagonal scale of R.F=1/4000 to show metres and long enough to measure upto 500 metres.  
 (b) Construct a regular hexagon of 35 mm side with one of its side vertical?

[10+6]

3. (a) The front view of a line inclined at  $30^\circ$  to the V.P is 65 mm long. Draw the projections of the line, when it is parallel to and 40 mm above the H.P, its one end being 30 mm in front of the V.P.  
 (b) Mark the projections of the following points on a common reference line, keeping the projectors 35mm apart.  
 (i) A, 25mm above H.P and 35mm in front of V.P  
 (ii) B, 25mm above H.P and 40 mm behind V.P  
 (iii) C, 30mm below H.P and 45 mm behind V.P  
 (iv) D, 30 mm below H.P and 40 mm in front V.P  
[8+8]
4. A line AB, 90 mm long, is inclined at  $45^\circ$  to the H.P and its top view makes an angle of  $60^\circ$  with the V.P. The end A is in the H.P and 12 mm in front of the V.P. Draw its front view and find its true inclination with the V.P.  
[16]
5. A square plate PQRS of negligible thickness having 35 mm side is lying on a corner R on H.P. One of the diagonals RP is inclined at  $35^\circ$  to H.P and  $40^\circ$  to V.P. The two sides QR and RS containing the corner R are equally inclined with H.P. Draw its projections.  
[16]
6. A hexagonal pyramid side of base 25 mm axis 50 mm long lies with one of its rectangular faces on the H.P and its axis is parallel to the V.P. Draw its projections.  
[16]
7. Draw (i) Front view and (ii) Top view of Fig.2  
[16]



Note: All dimensions are in mm.

Fig.2



**ENGINEERING DRAWING**

(Common to ECE, EIE, Bio-Tech, EComE, Agri.E)

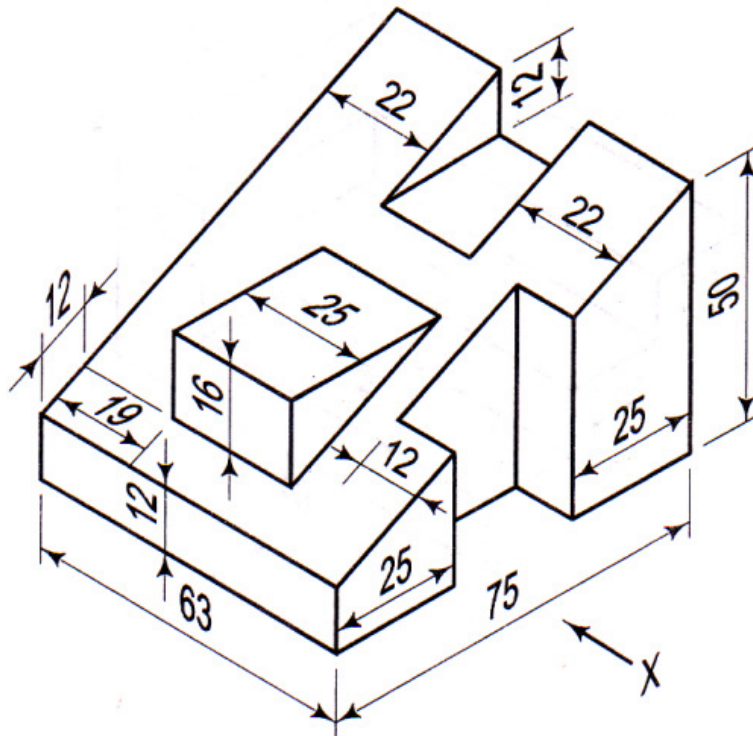
**Time: 3 hours****Max. Marks: 70**

Question Paper Consists of **Part-A** and **Part-B**  
 Answering the question in **Part-A** is Compulsory,  
 Three Questions should be answered from **Part-B**

\*\*\*\*\*

**PART-A**

- 1.(a) Draw (i) front view (ii) side view from the left (iii) top view of Fig.1



Note: All dimensions are in mm.

Fig.1

- (b) A hexagonal prism base 40 mm side and height 40 mm has a hole of 40 mm diameter drilled centrally through its ends. Draw its projections when it is resting on one of its corners on the H.P with its axis inclined at  $60^\circ$  to the H.P and two of its faces parallel to the V.P.

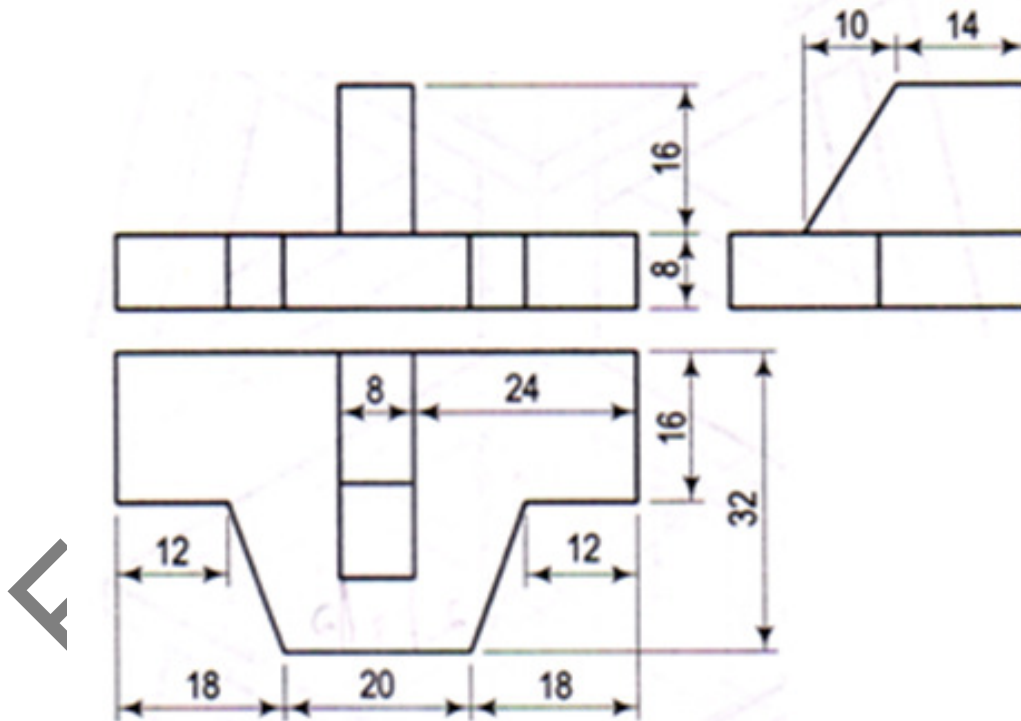
[12+10]

**PART-B**

2. (a) Construct an ellipse when the major axis is 120 mm and the distance between the foci is 108 mm. Determine the length of the minor axis.  
 (b) Draw a vernier scale of R.F =  $1/25$  to read centimeters up to 4 metres and on it, show lengths representing 2.39 m and 0.91 m.

[8+8]

3. Two pegs fixed on a wall are 4.5 metres apart. The distance between the pegs measured parallel to the floor is 3.6 metres. If one peg is 1.5 m above the floor, find the height of the second peg and the inclination of the line joining the two pegs with the floor. [16]
4. A line CD inclined at  $25^\circ$  to H.P measures 80 mm in top view. End C in the first quadrant and 25 mm and 15 mm from H.P and V.P respectively. End D is at equal distances from both the reference planes. Draw the projections; find true length and true inclination with V.P. Locate the traces. [16]
5. A  $60^\circ$  set-square of 125 mm longest side is so kept that the longest side in the H.P making an angle of  $30^\circ$  with the V.P and the set-square itself inclined at  $45^\circ$  to the H.P. Draw the projections of the set- square. [16]
6. Draw the projections of a pentagonal pyramid of base 25 mm side and axis 60 mm long when it is lying on H.P on one of its base edges, such that the axis is parallel to VP and inclined at  $30^\circ$  to HP. [16]
7. Draw the isometric view of Fig.2: [16]



Note: All dimensions are in mm.

Fig. 2.