

Code No: RT21042

**R13****SET - 1**

**II B. Tech I Semester Supplementary Examinations, June - 2015**  
**DATA STRUCTURES**  
(Com. to ECE, CSE, EIE, IT, ECC)

Time: 3 hours

Max. Marks: 70

---

Note: 1. Question Paper consists of two parts (**Part-A** and **Part-B**)  
2. Answer **ALL** the question in **Part-A**  
3. Answer any **THREE** Questions from **Part-B**

---

**PART -A**

- |   |    |   |     |
|---|----|---|-----|
| 1 | a) | Differentiate between time complexity and space complexity            | 3 M |
|   | b) | Give the analysis of Heap Sort Algorithm                              | 4 M |
|   | c) | Describe any one method for representing sparse matrix.               | 4 M |
|   | d) | What are the advantages of Threaded Binary Tree                       | 4M  |
|   | e) | Draw a binary tree with five nodes and three leaves.                  | 3M  |
|   | f) | State the situation at which binary search algorithm is best applied. | 4 M |

**PART -B**

- |   |    |   |     |
|---|----|---|-----|
| 2 | a) | Explain Divide and Conquer algorithmic strategy using Merge Sort as an example.   | 8 M |
|   | b) | Explain Towers of Hanoi problem with illustrative diagrams.   | 8 M |
| 3 | a) | "Queues can be implemented using two stacks" - Support this statement with suitable programming example.  | 8 M |
|   | b) | Write an algorithm to convert infix expression into a postfix expression.<br>Illustrate the same with the given infix expression: $((a + b) / d - ((e - f) + g))$ | 8 M |
| 4 | a) | Explain how linked list can be used for representing polynomials using a suitable example.  | 8 M |
|   | b) | Write an algorithm to implement queue using linked list.  | 8 M |



Code No: RT21042

**R13**

**SET - 1**

- 5 a) Write a recursive procedure which finds the depth  $D$  of a binary tree  $T$ . 8 M  
b) Explain various methods in which a binary tree can be represented. Discuss their advantages and disadvantages. 8 M
- 6 a) With the help of diagrams construct a Binary Search Tree (BST) with the following keys: 86, 12, 42, 69, 38, 57, 74, 6, 49, 71. Also delete 42 from the constructed BST. 8 M  
b) Write a short note on the non-recursive tree traversals using stack. 8 M
- 7 a) What are different ways of representing a graph? Explain using suitable example. 8 M  
b) Define the following terms with respect of a graph: 8 M  
i) Degree of vertex  
ii) Incident edge  
iii) Directed edge  
iv) Path

Code No: RT21042

**R13**

**SET - 2**

**II B. Tech I Semester Supplementary Examinations, June - 2015**  
**DATA STRUCTURES**  
(Com. to ECE, CSE, EIE, IT, ECC)

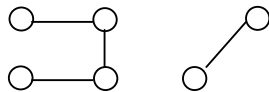
Time: 3 hours

Max. Marks: 70

- Note: 1. Question Paper consists of two parts (**Part-A** and **Part-B**)  
2. Answer **ALL** the question in **Part-A**  
3. Answer any **THREE** Questions from **Part-B**
- ~~~~~

**PART - A**

- 1 a) List out the pros and cons of recursion. 4 M  
b) Write an algorithm to insert an element into circular queue. 3 M  
c) What is the running time of Quick sort and why. 4 M  
d) State how recursion is different from iteration? 3 M  
e) List out the properties of Binary Search Tree 4 M  
f) With respect to the graph below 4 M  
(a) Is it cyclic?  
(b) Is it connected?



**PART - B**

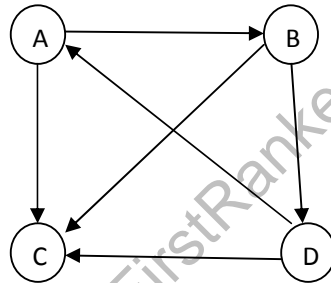
- 2 a) Define an algorithm. Describe commonly used asymptotic notations and give their significance. 8 M  
b) Write an algorithm to implement Binary Search technique. Use the algorithm to search 32 in the following list of elements. Explain the process at each step. 8 M  
12, 16, 17, 19, 20, 22, 24, 29, 30, 32, 37
- 3 a) What is a stack? Explain overheads caused by stack in recursion with a suitable example. 8 M  
b) Write the algorithm for evaluating a postfix expression using stack. Evaluate the following postfix notation 5 6 2 + \* 8 4 / - 8 M
- 4 a) What is linked list? Write an algorithm for inserting an element E at the given position P of the linked list. 8 M  
b) What is a sparse matrix? Write an algorithm for finding the transpose of a sparse matrix. 8 M

Code No: RT21042

**R13**

**SET - 2**

- 5 a) What is a binary tree? Construct a binary tree given the pre-order traversal and in-order traversals as follows: 8 M  
Pre-Order Traversal: G B Q A C K F P D E R H  
In-Order Traversal: Q B K C F A G P E D H R
- b) Define the following terms with suitable examples 8 M  
i. Binary Tree  
ii. Strictly Binary Tree  
iii. Complete Binary Tree  
iv. Almost Complete Binary Tree
- 6 a) Write a procedure to search an element in a Binary Search Tree. 8 M  
b) Write a short note on various operations of the threaded binary tree. 8 M
- 7 a) Write an algorithm to traverse the graph using Breadth First Search with a suitable example? 8 M  
b) What is Adjacency Matrix? Draw the Adjacency Matrix of the following graph. Also give adjacency list representation for the same. 8 M



Code No: RT21042

**R13**

**SET - 3**

**II B. Tech I Semester Supplementary Examinations, June - 2015**  
**DATA STRUCTURES**  
(Com. to ECE, CSE, EIE, IT, ECC)

Time: 3 hours

Max. Marks: 70

- 
- Note: 1. Question Paper consists of two parts (**Part-A** and **Part-B**)  
2. Answer **ALL** the question in **Part-A**  
3. Answer any **THREE** Questions from **Part-B**
- ~~~~~

**PART -A**

- 1 a) What is an algorithm? List out the properties of an algorithm. 4 M  
b) Differentiate POP with PEEP operation of a stack. 3 M  
c) List out the advantages and disadvantages of using linked list over an array 4 M  
d) Write an algorithm to count the number of nodes in a circularly linked list. 4 M  
e) Draw the BST for the given list of elements 46, 21, 56, 89, 9, 12. 4 M  
f) Draw an undirected graph from the given adjacency matrix. 3 M

$$\begin{bmatrix} 1 & 0 & 1 \\ 1 & 1 & 0 \\ 0 & 0 & 1 \end{bmatrix}$$

**PART -B**

- 2 a) Write a recursive function to find factorial of a given number. 8 M  
b) Explain radix sort with an algorithm. Discuss on its time complexity. 8 M
- 3 a) List out the applications of stack. Consider the usual algorithm for determining whether a sequence of parentheses is balanced. What is the maximum number of parentheses that will appear on the stack AT ANY ONE TIME when the algorithm analyzes: (( ) ( ( ) ) ( ( ) ) )? 8 M  
b) Explain various operations that are performed on queue with suitable algorithms. 8 M
- 4 a) Write algorithms for swapping two successive elements in a singly linked list with the first element placed at position P. 8 M  
b) What is a circular linked list? Write an algorithm to merge two circular linked lists. 8 M



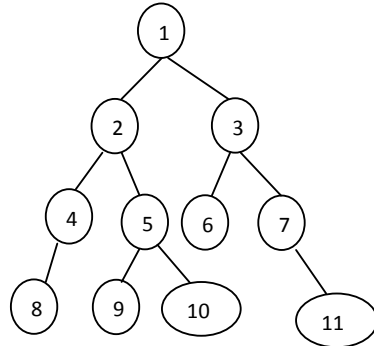
Code No: RT21042

**R13**

**SET - 3**

5 a) Consider the following tree.

8 M



- i. How many leaves does it have?
- ii. How many of the nodes have at least one sibling?
- iii. List out the nodes that are siblings to node 5?
- iv. How many descendants does the root have?
- v. What is the depth of the tree?
- vi. How many children does the root have?
- vii. "Is it a complete binary tree" - Justify

b) Write the iterative procedures for

8 M

- i. Post-Order Traversal of a binary tree
- ii. Level-Order Traversal of a binary tree

6 a) Define threaded binary tree. Explain inorder threading using suitable example. Discuss advantages of the threaded binary tree.

8 M

b) Write a procedure to find the maximum and minimum elements of a Binary Search Tree (BST).

8 M

7 a) Write the Prim's algorithm for finding the minimum-spanning tree of a graph with an example.

8 M

b) What is transitive closure of a graph. Explain Warshall's algorithm to find the transitive closure of the graph with a suitable example

8 M



Code No: RT21042

**R13****SET - 4**

**II B. Tech I Semester Supplementary Examinations, June - 2015**  
**DATA STRUCTURES**  
(Com. to ECE, CSE, EIE, IT, ECC)

Time: 3 hours

Max. Marks: 70

- 
- Note: 1. Question Paper consists of two parts (**Part-A** and **Part-B**)  
2. Answer **ALL** the question in **Part-A**  
3. Answer any **THREE** Questions from **Part-B**
- ~~~~~

**PART - A**

- |   |    |  |     |
|---|----|--|-----|
| 1 | a) | List out some examples for linear and non-linear data structures.  | 3 M |
|   | b) | Write the differences between stack and queue.   | 3 M |
|   | c) | What is singly linked list? Mention any two advantages of singly linked lists.   | 4 M |
|   | d) | State the scenario under which insertion sort should be used.  | 4 M |
|   | e) | Define threaded binary tree with an example.   | 4 M |
|   | f) | Does the minimal spanning tree of a graph give the shortest distance between any two specified nodes? Justify your answer. | 4 M |

**PART - B**

- |   |    |   |     |
|---|----|---|-----|
| 2 | a) | Arrange the list of elements in ascending order using quick sort 45, 26, 31, 55, 77, 24, 42, 63, 99, 22, 88, 72 ? Write the value of left pointer l, right pointer r and pivot at each step and also draw the current scenario after each step? | 8 M |
|   | b) | Write a recursive procedure to compute the n <sup>th</sup> Fibonacci number.  | 8 M |
| 3 | a) | "One of the applications of stack is <b>Reversing a List</b> " Explain it with a suitable algorithm.  | 8 M |
|   | b) | List out various applications of queues. Explain how queue is used in Round Robin Algorithm with neat diagrams wherever necessary?  | 8 M |
| 4 | a) | Discuss the advantages and disadvantages of representing a group of items as an array versus a linear linked list.  | 8 M |
|   | b) | Write an algorithm to insert a node at the end of a doubly linked list.   | 8 M |

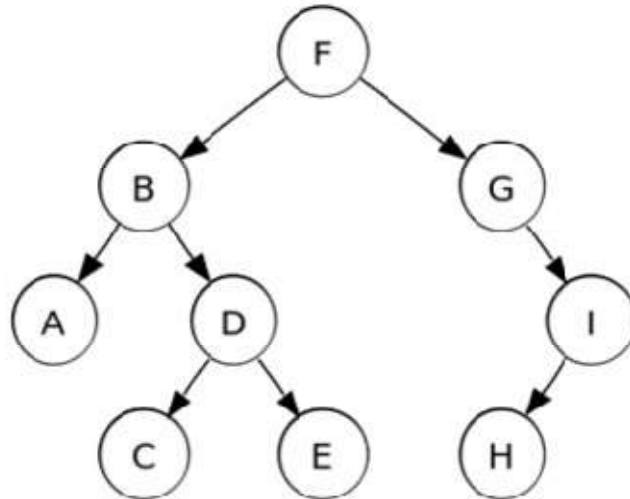


Code No: RT21042

**R13**

**SET - 4**

- 5 a) Find the inorder, preorder and postorder traversals for the given binary tree. 8 M



- b) Write a procedure to display the nodes of a binary tree at a particular level. 8 M
- 6 a) Give the analysis of insertion and deletion operations of nodes in binary search tree. 10 M
- b) Write a short note on Balanced Binary Trees. Also discuss on the applications of Balanced Binary Trees. 6 M
- 7 a) Differentiate between the DFS and BFS graph traversal techniques. 8 M
- b) What are connected components of a graph? Is there a method to find out all the connected components of a graph? Explain. 8 M

