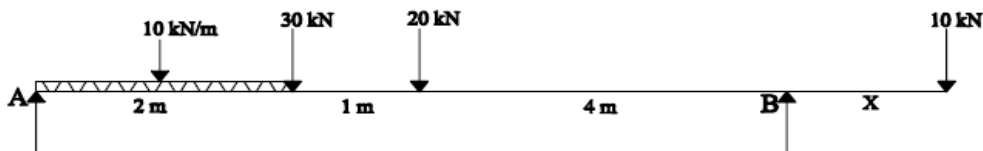


c A uniform ladder of length 15 m rests against a vertical wall making an angle 60° with the horizontal. Coefficient of friction between wall and the ladder is 0.30 and between ground and ladder is 0.25. A man weighing 500N ascends the ladder. How long will he be able to go before the ladder slips? Find the weight that is necessary to be put at the bottom of the ladder so as to be just sufficient to permit the man to go to the top. Assume weight of the ladder to be 850 N.

8m

Module –3

- 5a What is meant by equilibrium of a rigid body? State the conditions of static equilibrium for coplanar non-concurrent force system? 6m
- b Solve for the distance **X** such that the reaction R_A and R_B is equal for the beam shown in Fig. Q.5 (b).

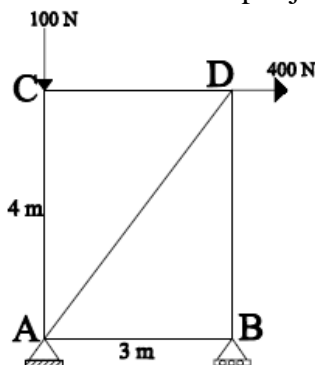


14m

Fig. Q.5(b)

OR

- 6a List the steps followed in the analysis of truss by method of Joints 6m
- b Find the support reactions and member forces for pin jointed plane truss shown in Fig. Q. 6 (b).

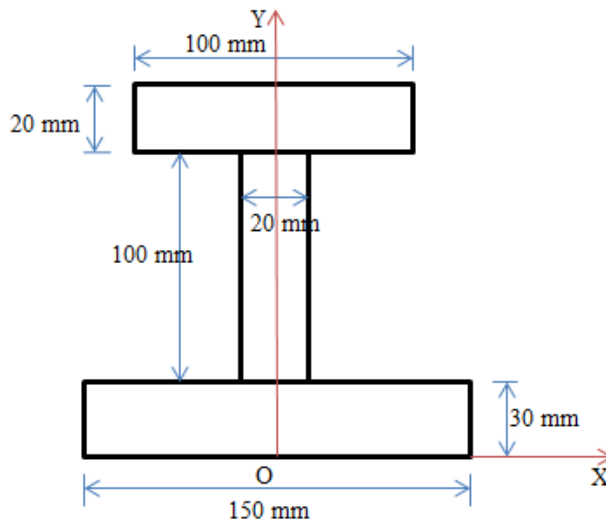


14m

Fig. Q. 6 (b).

Module –4

- 7a Derivation of expression for centroid of Triangle. 6m
- b Locate the Centroid of geometrical Fig.Q.7 (b). Shown with respect to horizontal axis.



14m

Fig.Q.7 (b).

OR

- 8a State and prove Parallel axis theorem 6m
- b Obtain the Moment of Inertia and the radius of gyration of the shaded area shown in Fig. Q. 8. (b) With respect to X and Y axis. 14m

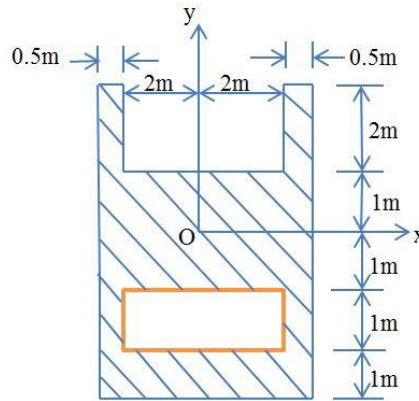


Fig. Q. 8. (b)

Module -5

- 9a Define displacement, Velocity, Distance Travelled, Speed and Acceleration. 4 m
- b A vehicle is moving with variable acceleration and its motion is given by the equation $s = 25t + 4t^2 - 6t^3$, where 's' is in m and 't' is in seconds. Determine (i) the velocity and acceleration at start (ii) the time, when the vehicle reaches its maximum velocity (iii) the max velocity of the vehicle. 8m
- c An aircraft moving horizontally at 120 kms/hr speed at an elevation of 1200m targets a point on the ground and releases a bomb which hits it. Determine the horizontal distance of the aircraft (position when it releases the bomb) from the target. Also calculate the velocity and direction with which bomb hits the target. 8m

OR

- 10a State Newton's Laws of Motion 4m
- b State D'Alembert's principle and mention its applications in Plane Motion. 8m
- c A particle is projected in air with a velocity of 120 m/sec at an angle of 30° with the horizontal. Determine (i) the horizontal range (ii) the max height by the particle (iii) the time of flight. 8m